










Making 10

Draw more shapes to make 10 and complete the addition equation.

1)




2)


				
				

1 + _____

_____ = 10

3)




		






		

5 + _____

_____ = 10

5)

4 + _____ = 10

7 + _____ = 10

PREVIEW

Gain complete access to the largest collection of worksheets in all subjects!

Members, please log in to download this worksheet.

Not a member? Please sign up to gain complete access.

www.mathworksheets4kids.com

Making 10

Draw more shapes to make 10 and complete the addition equation.

1)

2)

$1 + \underline{9} = 10$

$\underline{2} = 10$

3)

PREVIEW

Gain complete access to the largest collection of worksheets in all subjects!

Members, please log in to download this worksheet.

Not a member? Please sign up to gain complete access.

www.mathworksheets4kids.com

$5 + \underline{5} = 10$

$\underline{7} = 10$

5)

$4 + \underline{6} = 10$

$7 + \underline{3} = 10$