

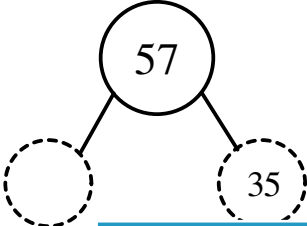
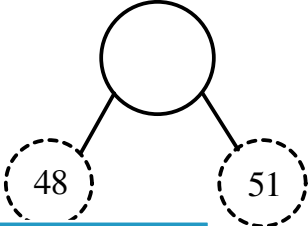




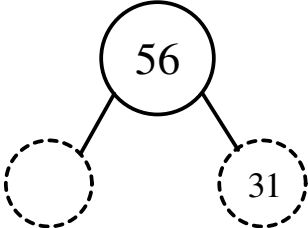
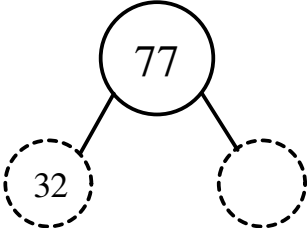
Student Name: _____

Score: _____

Missing Number Bond

No regrouping

Use addition or subtraction to find the missing numbers:

1) 	2) 
3) 	<p>PREVIEW</p> <p>Gain complete access to the largest collection of worksheets in all subjects!</p> <p>Members, please log in to download this worksheet.</p> <p>Not a member? Please sign up to gain complete access.</p> <p>www.mathworksheets4kids.com</p>
5) 	
7) 	10) 
9) 	

Student Name: _____

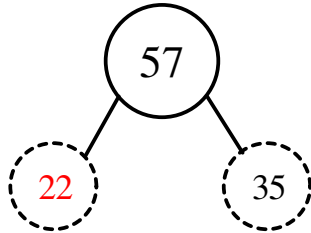
Score: _____

Answer key

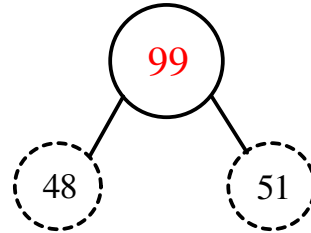
Missing Number Bond

No regrouping

1)



2)



3)



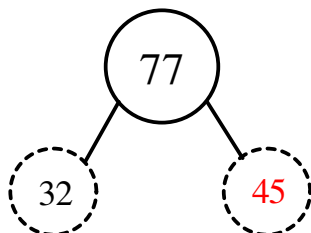
5)



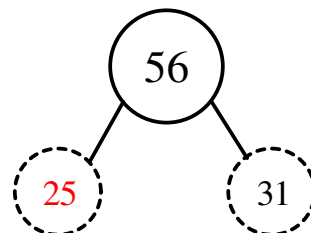
7)



9)



10)



PREVIEW

Gain complete access to the largest collection of worksheets in all subjects!

Members, please log in to download this worksheet.

Not a member? Please sign up to gain complete access.

www.mathworksheets4kids.com