

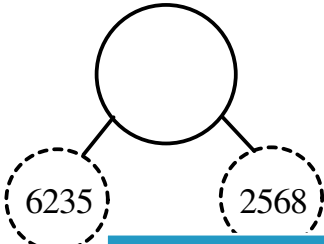
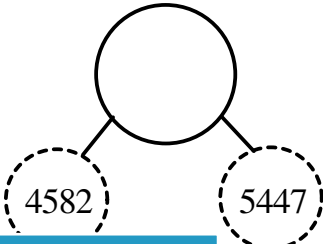


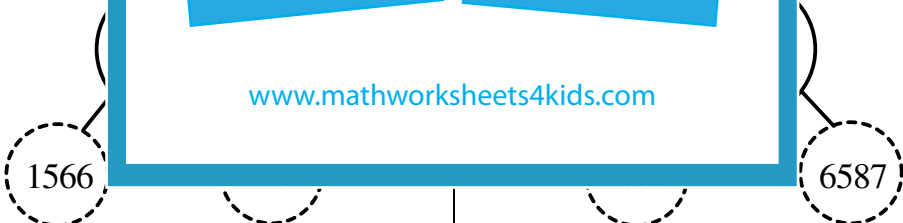
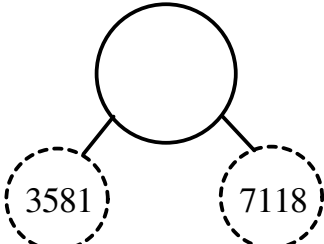
Student Name: _____

Score: _____

Missing Number Bond

4-digit: E

Use addition or subtraction to find the missing numbers:

1) 	2) 
3) 	<div data-bbox="479 682 1144 1585"><h1>PREVIEW</h1><p>Gain complete access to the largest collection of worksheets in all subjects!</p><p>Members, please log in to download this worksheet.</p><p>Not a member? Please sign up to gain complete access.</p><p>www.mathworksheets4kids.com</p></div>
5) 	
7) 	
9) 	

Student Name: _____

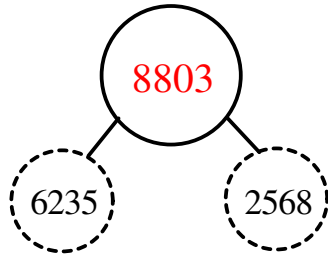
Score: _____

Answer key

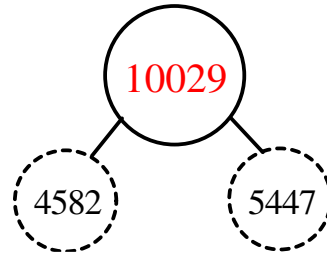
Missing Number Bond

4-digit: E

1)



2)



3)



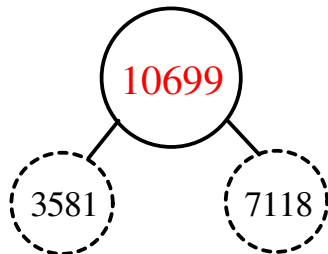
5)



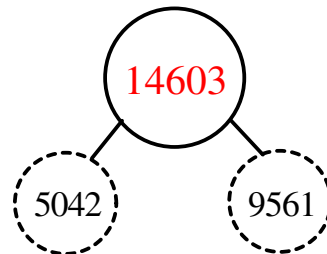
7)



9)



10)



PREVIEW

Gain complete access to the largest collection of worksheets in all subjects!

Members, please log in to download this worksheet.

Not a member? Please sign up to gain complete access.

www.mathworksheets4kids.com