

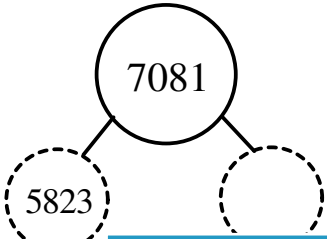
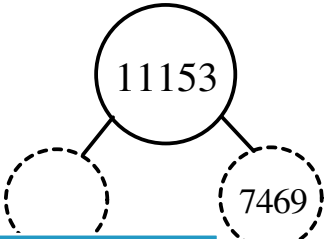

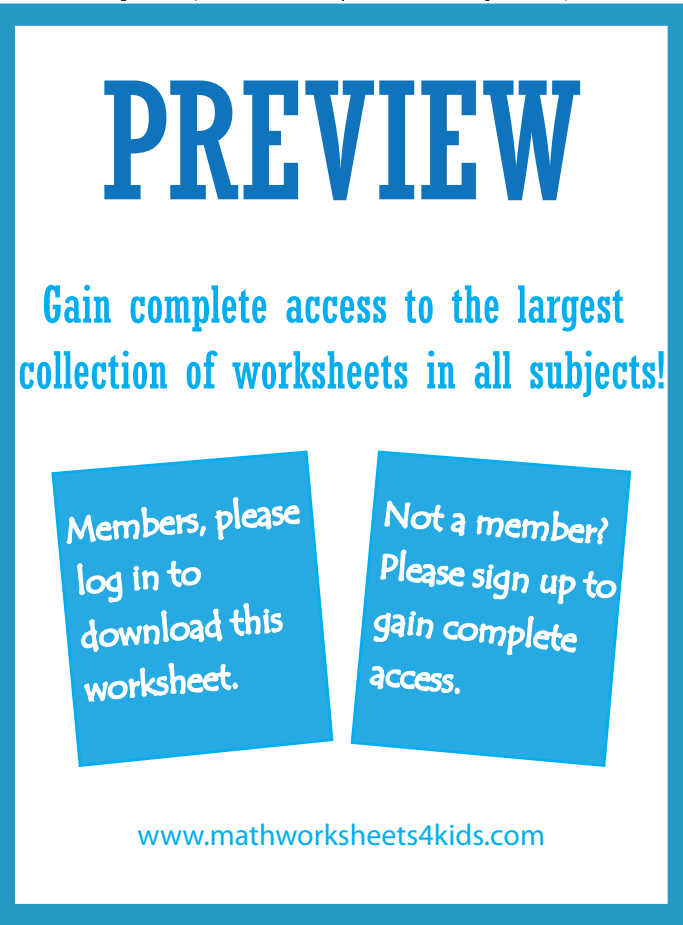



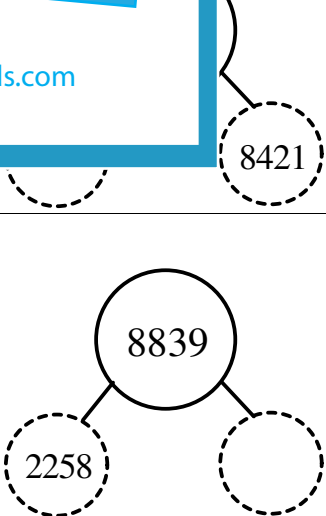
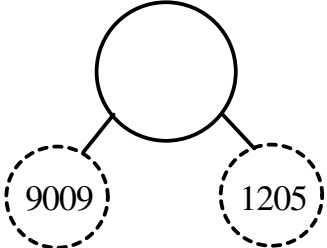
Student Name: \_\_\_\_\_

Score: \_\_\_\_\_

**Missing Number Bond**

4-digit: M

Use addition or subtraction to find the missing numbers:

1) 	2) 
3) 	
5) 	
7) 	10) 
9) 	

Student Name: \_\_\_\_\_

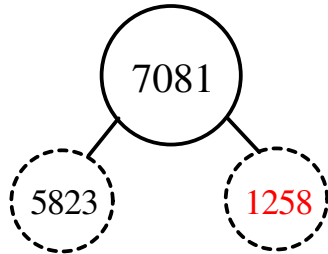
Score: \_\_\_\_\_

Answer key

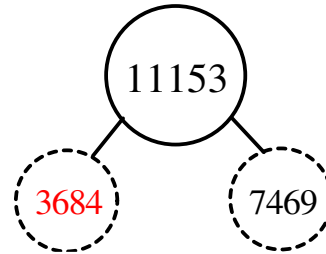
Missing Number Bond

4-digit: M

1)



2)



3)



**PREVIEW**

Gain complete access to the largest collection of worksheets in all subjects!

Members, please log in to download this worksheet.

Not a member? Please sign up to gain complete access.

[www.mathworksheets4kids.com](http://www.mathworksheets4kids.com)



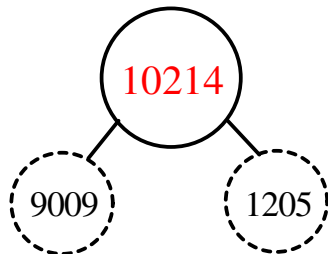
5)



7)



9)



10)

