

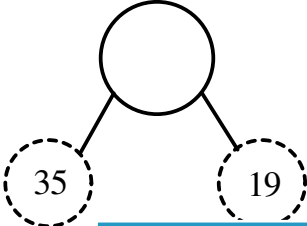
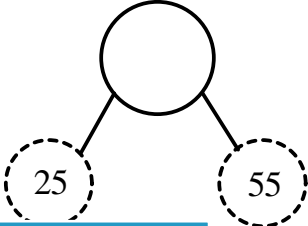



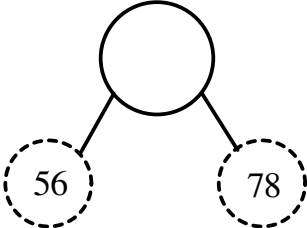
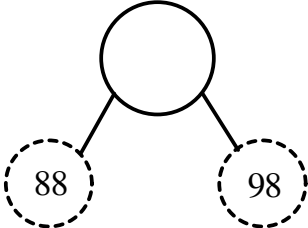
Student Name: _____

Score: _____

Number Bond

2-digit: M

Use addition to find the missing numbers:

1) 	2) 
3) 	<p>PREVIEW</p> <p>Gain complete access to the largest collection of worksheets in all subjects!</p> <p>Members, please log in to download this worksheet.</p> <p>Not a member? Please sign up to gain complete access.</p> <p>www.mathworksheets4kids.com</p>
5) 	7) 
9) 	10) 

Student Name: _____

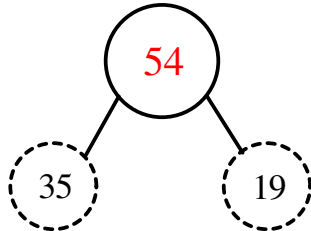
Score: _____

Answer key

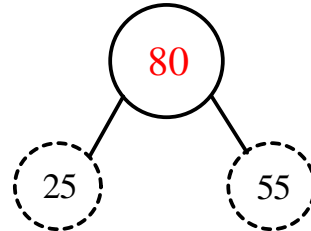
Number Bond

2-digit: M

1)



2)



3)



PREVIEW

Gain complete access to the largest collection of worksheets in all subjects!

Members, please log in to download this worksheet.

Not a member? Please sign up to gain complete access.



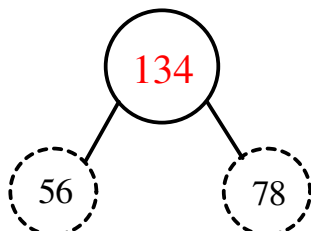
5)



7)



9)



10)

