

Student Name: _____

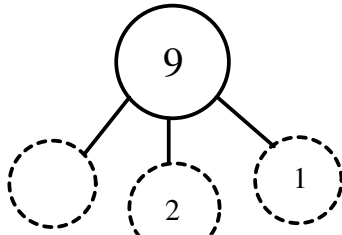
Score: _____

Number Bond

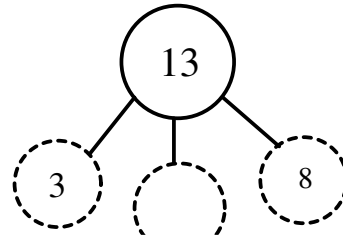
D

Use addition and subtraction to find the missing numbers:

1)



2)

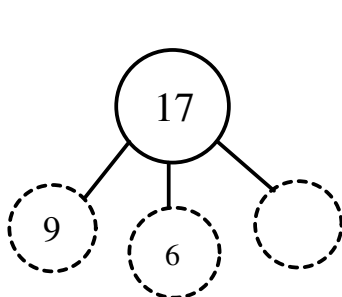


3)

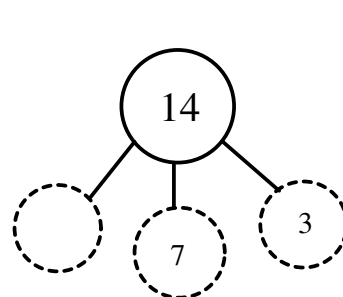
5)

7)

9)



10)



Student Name: _____

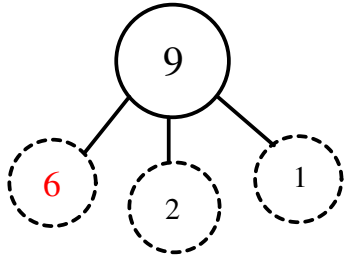
Score: _____

Answer key

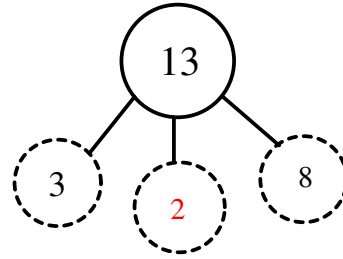
Number Bond

D

1)



2)



3)

A large blue rectangular watermark box with the word "PREVIEW" in large, bold, blue capital letters at the top. Below it, in smaller blue text, is "Gain complete access to the largest collection of worksheets in all subjects!". At the bottom of the box, there are two blue rectangular callouts. The left one says "Members, please log in to download this worksheet." and the right one says "Not a member? Please sign up to gain complete access." Below these callouts is the website address "www.mathworksheets4kids.com". The watermark box is surrounded by several dashed circles containing numbers: 4 on the left, 7 on the right, 9 on the left, 2 on the right, 3 on the left, and 7 on the right.

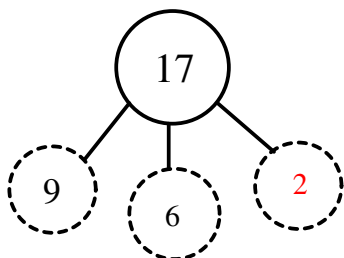
5)



7)



9)



10)

