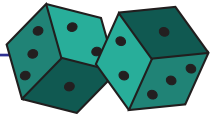
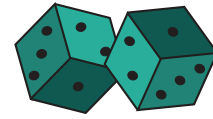


Name : _____

Score : _____



Dice Addition



2 Dice: S1

Count the dots on each die and add them.

1)  +  =

2)  +  =

3)  +  =

4)  +  =

5)  +  =

6)  +  =

7)  +  =

8)  +  =

9)  +  =

10)  +  =

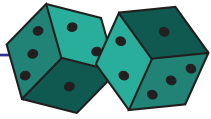
11)  +  =

12)  +  =

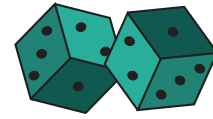
Name : _____

Score : _____

Answer Key



Dice Addition



2 Dice: S1

Count the dots on each die and add them.

1)  +  = 7

2)  +  = 6


3)  +  = 9

4)  +  = 2

5)  +  = 6

6)  +  = 9

7)  +  = 5

8)  +  = 4

9)  +  = 3

10)  +  = 7

11)  +  = 10

12)  +  = 11