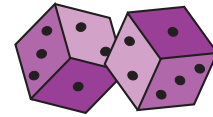



Dice Addition



3 Dice: S2

Count the dots on each die and add them.

1)  +  +  =

2)  +  +  =

3)  +  +  =

5)  +  +  =

7)  +  +  =

9)  +  +  =

11)  +  +  =

12)  +  +  =

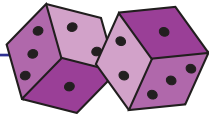
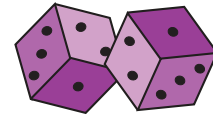
PREVIEW

Gain complete access to the largest collection of worksheets in all subjects!

Members, please log in to download this worksheet.

Not a member? Please sign up to gain complete access.

www.mathworksheets4kids.com

Answer Key**Dice Addition**

3 Dice: S2

Count the dots on each die and add them.

$$1) \begin{array}{|c|} \hline \cdot \\ \hline \end{array} + \begin{array}{|c|} \hline \cdot \cdot \\ \cdot \cdot \\ \hline \end{array} + \begin{array}{|c|} \hline \cdot \\ \hline \end{array} = \boxed{6}$$

$$2) \begin{array}{|c|} \hline \cdot \cdot \\ \cdot \\ \hline \end{array} + \begin{array}{|c|} \hline \cdot \cdot \\ \cdot \cdot \\ \hline \end{array} + \begin{array}{|c|} \hline \cdot \\ \hline \end{array} = \boxed{8}$$

$$3) \begin{array}{|c|} \hline \cdot \cdot \\ \cdot \cdot \\ \hline \end{array} + \begin{array}{|c|} \hline \cdot \cdot \\ \cdot \cdot \\ \hline \end{array} + \begin{array}{|c|} \hline \cdot \\ \hline \end{array} = \boxed{5}$$

$$5) \begin{array}{|c|} \hline \cdot \cdot \\ \cdot \cdot \\ \hline \end{array} + \begin{array}{|c|} \hline \cdot \cdot \\ \cdot \cdot \\ \hline \end{array} + \begin{array}{|c|} \hline \cdot \cdot \\ \cdot \\ \hline \end{array} = \boxed{12}$$

$$7) \begin{array}{|c|} \hline \cdot \cdot \\ \cdot \cdot \\ \hline \end{array} + \begin{array}{|c|} \hline \cdot \\ \hline \end{array} + \begin{array}{|c|} \hline \cdot \cdot \\ \cdot \\ \hline \end{array} = \boxed{4}$$

$$9) \begin{array}{|c|} \hline \cdot \\ \hline \end{array} + \begin{array}{|c|} \hline \cdot \cdot \\ \cdot \cdot \\ \cdot \cdot \\ \hline \end{array} + \begin{array}{|c|} \hline \cdot \cdot \\ \cdot \cdot \\ \hline \end{array} = \boxed{11}$$

$$11) \begin{array}{|c|} \hline \cdot \cdot \\ \cdot \cdot \\ \hline \end{array} + \begin{array}{|c|} \hline \cdot \cdot \\ \cdot \cdot \\ \hline \end{array} + \begin{array}{|c|} \hline \cdot \cdot \\ \cdot \cdot \\ \hline \end{array} = \boxed{16}$$

$$12) \begin{array}{|c|} \hline \cdot \cdot \\ \cdot \cdot \\ \hline \end{array} + \begin{array}{|c|} \hline \cdot \cdot \\ \cdot \cdot \\ \hline \end{array} + \begin{array}{|c|} \hline \cdot \cdot \\ \cdot \cdot \\ \cdot \cdot \\ \hline \end{array} = \boxed{15}$$

PREVIEW

Gain complete access to the largest collection of worksheets in all subjects!

Members, please log in to download this worksheet.

Not a member? Please sign up to gain complete access.

www.mathworksheets4kids.com