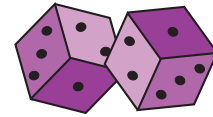


Dice Addition



3 Dice: S3

Count the dots on each die and add them.

1) + + =

2) + + =

3) + + + + + =

5) + + + =

7) + + =

9) + + + =

11) + + =

12) + + =

PREVIEW

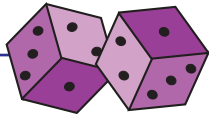
Gain complete access to the largest collection of worksheets in all subjects!

Members, please log in to download this worksheet.

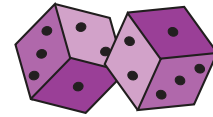
Not a member? Please sign up to gain complete access.

www.mathworksheets4kids.com

Answer Key



Dice Addition



3 Dice: S3

Count the dots on each die and add them.

$$1) \begin{array}{|c|} \hline \cdot \cdot \\ \cdot \cdot \\ \hline \end{array} + \begin{array}{|c|} \hline \cdot \cdot \cdot \\ \cdot \cdot \cdot \\ \hline \end{array} + \begin{array}{|c|} \hline \cdot \cdot \cdot \\ \cdot \cdot \cdot \\ \hline \end{array} = \boxed{16}$$

$$2) \begin{array}{|c|} \hline \cdot \cdot \cdot \\ \cdot \cdot \cdot \\ \hline \end{array} + \begin{array}{|c|} \hline \cdot \cdot \cdot \\ \cdot \cdot \cdot \\ \hline \end{array} + \begin{array}{|c|} \hline \cdot \\ \hline \end{array} = \boxed{10}$$

$$3) \begin{array}{|c|} \hline \cdot \\ \cdot \\ \hline \end{array} + \begin{array}{|c|} \hline \cdot \\ \cdot \\ \hline \end{array} + \begin{array}{|c|} \hline \cdot \cdot \cdot \\ \cdot \cdot \cdot \\ \hline \end{array} + \begin{array}{|c|} \hline \cdot \cdot \cdot \\ \cdot \cdot \cdot \\ \hline \end{array} = \boxed{14}$$

$$5) \begin{array}{|c|} \hline \cdot \cdot \\ \cdot \cdot \\ \hline \end{array} + \begin{array}{|c|} \hline \cdot \\ \hline \end{array} + \begin{array}{|c|} \hline \cdot \cdot \cdot \\ \cdot \cdot \cdot \\ \hline \end{array} + \begin{array}{|c|} \hline \cdot \cdot \cdot \\ \cdot \cdot \cdot \\ \hline \end{array} = \boxed{17}$$

$$7) \begin{array}{|c|} \hline \cdot \cdot \cdot \\ \cdot \cdot \cdot \\ \hline \end{array} + \begin{array}{|c|} \hline \cdot \cdot \cdot \\ \cdot \cdot \cdot \\ \hline \end{array} + \begin{array}{|c|} \hline \cdot \cdot \cdot \\ \cdot \cdot \cdot \\ \hline \end{array} = \boxed{9}$$

$$9) \begin{array}{|c|} \hline \cdot \cdot \\ \cdot \cdot \\ \hline \end{array} + \begin{array}{|c|} \hline \cdot \cdot \\ \cdot \cdot \\ \hline \end{array} + \begin{array}{|c|} \hline \cdot \cdot \cdot \\ \cdot \cdot \cdot \\ \hline \end{array} + \begin{array}{|c|} \hline \cdot \\ \hline \end{array} = \boxed{4}$$

$$11) \begin{array}{|c|} \hline \cdot \\ \cdot \\ \hline \end{array} + \begin{array}{|c|} \hline \cdot \cdot \cdot \\ \cdot \cdot \cdot \\ \hline \end{array} + \begin{array}{|c|} \hline \cdot \cdot \cdot \\ \cdot \cdot \cdot \\ \hline \end{array} = \boxed{12}$$

$$12) \begin{array}{|c|} \hline \cdot \cdot \cdot \\ \cdot \cdot \cdot \\ \hline \end{array} + \begin{array}{|c|} \hline \cdot \cdot \\ \cdot \cdot \\ \hline \end{array} + \begin{array}{|c|} \hline \cdot \\ \hline \end{array} = \boxed{8}$$

PREVIEW

Gain complete access to the largest
collection of worksheets in all subjects!

Members, please
log in to
download this
worksheet.

Not a member?
Please sign up to
gain complete
access.

www.mathworksheets4kids.com