

Count & Add

Sums up to 10: S3

1)



2

+

1

=

2)




4

PREVIEW

=

3)




6

Gain complete access to the largest
collection of worksheets in all subjects!Members, please
log in to
download this
worksheet.Not a member?
Please sign up to
gain complete
access.

=

4)



3

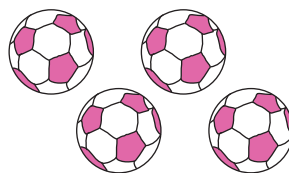
www.mathworksheets4kids.com

=

5)



+



1

+

4

=

Answer Key**Count & Add**

Sums up to 10: S3

1)



2

+

1

=

3

2)




4

=

6

3)




6

=

9

4)



3

=

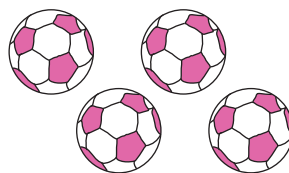
8

5)



1

+



4

=

5

PREVIEW

Gain complete access to the largest collection of worksheets in all subjects!

Members, please log in to download this worksheet.

Not a member? Please sign up to gain complete access.

www.mathworksheets4kids.com