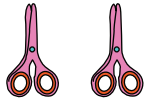


Count & Add

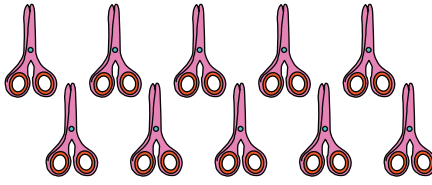
Sums up to 20: S3

1)



2

+




+

10

=

2)



8

+



=

3)



1

+

Gain complete access to the largest collection of worksheets in all subjects!

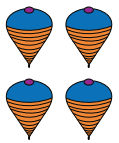
Members, please log in to download this worksheet.

Not a member? Please sign up to gain complete access.

www.mathworksheets4kids.com

=

4)



6

+

=

5)



3

+



+

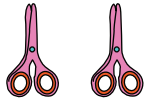
3

=

Answer Key**Count & Add**

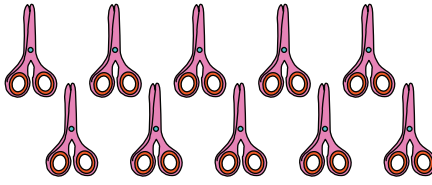
Sums up to 20: S3

1)



2

+




+

10

=

12

2)



8

=

17

3)

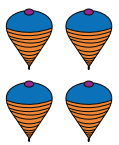


1

=

8

4)



6

=

19

5)



3

+



+

3

=

6**PREVIEW**

Gain complete access to the largest collection of worksheets in all subjects!

Members, please log in to download this worksheet.

Not a member? Please sign up to gain complete access.

www.mathworksheets4kids.com