

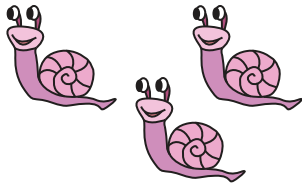
Name: _____

Score: _____

Count & Add

Sums up to 5: S1

1)



+




3

+


1

=

2)



+



2

+

3

=

3)



+



1

+

1

=

4)



+



1

+

4

=

5)



+



2

+

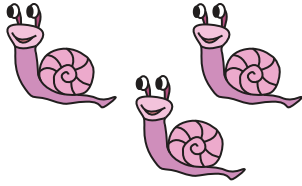
1

=

Answer Key**Count & Add**

Sums up to 5: S1

1)



+



3


+

1


=

4

2)



+



2

+

3

=

5

3)



+



1

+

1

=

2

4)



+



1

+

4

=

5

5)



+



2

+

1

=

3