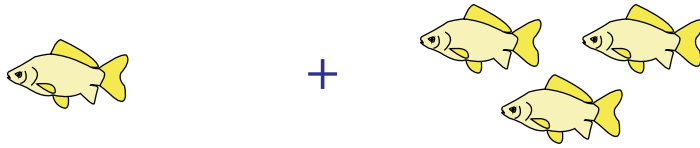


**Count & Add**

Sums up to 5: S3

1)




1

+

3

=

2)



4

=


3)



1

=

4)



2

=

5)



2

+

2

=

**PREVIEW**

Gain complete access to the largest collection of worksheets in all subjects!

Members, please log in to download this worksheet.

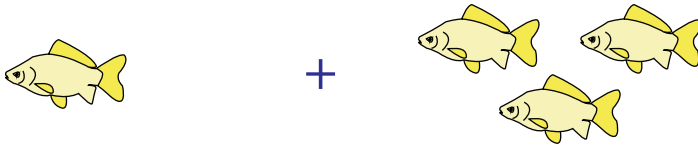
Not a member? Please sign up to gain complete access.

[www.mathworksheets4kids.com](http://www.mathworksheets4kids.com)

**Answer Key****Count & Add**


Sums up to 5: S3

1)



$$1 + 3 = \boxed{4}$$

2)



4

**PREVIEW**

Gain complete access to the largest collection of worksheets in all subjects!

Members, please log in to download this worksheet.

Not a member? Please sign up to gain complete access.

[www.mathworksheets4kids.com](http://www.mathworksheets4kids.com)

$$4 = \boxed{5}$$


3)



1

$$1 = \boxed{3}$$

4)



2

$$2 = \boxed{5}$$

5)



2

+

2

$$= \boxed{4}$$