


Domino Addition

Sheet 1


Count the number of dots on each domino, add and write the answer.

1)



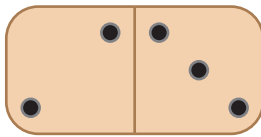
$$\underline{\quad} + \underline{\quad} = \underline{\quad}$$

2)



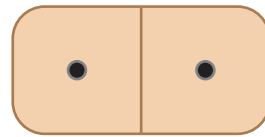
$$\underline{\quad} + \underline{\quad} = \underline{\quad}$$

3)



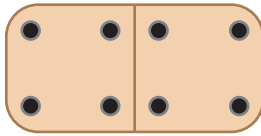
$$\underline{\quad} + \underline{\quad} = \underline{\quad}$$

4)




$$\underline{\quad} + \underline{\quad} = \underline{\quad}$$

5)



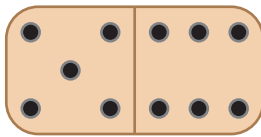
$$\underline{\quad} + \underline{\quad} = \underline{\quad}$$

6)



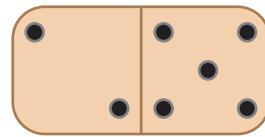
$$\underline{\quad} + \underline{\quad} = \underline{\quad}$$

7)



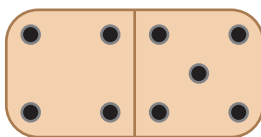
$$\underline{\quad} + \underline{\quad} = \underline{\quad}$$

8)



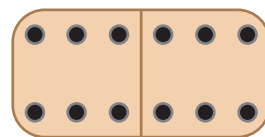
$$\underline{\quad} + \underline{\quad} = \underline{\quad}$$

9)



$$\underline{\quad} + \underline{\quad} = \underline{\quad}$$

10)




$$\underline{\quad} + \underline{\quad} = \underline{\quad}$$

Domino Addition

Sheet 1


Count the number of dots on each domino, add and write the answer.

1)



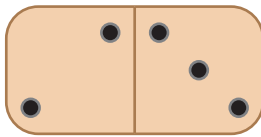
$$\underline{3} + \underline{1} = \underline{4}$$

2)



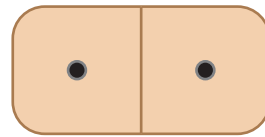
$$\underline{4} + \underline{2} = \underline{6}$$

3)



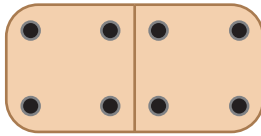
$$\underline{2} + \underline{3} = \underline{5}$$

4)




$$\underline{1} + \underline{1} = \underline{2}$$

5)



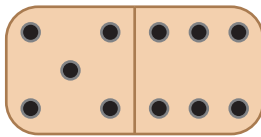
$$\underline{4} + \underline{4} = \underline{8}$$

6)



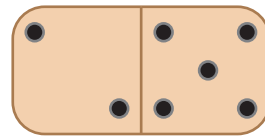
$$\underline{6} + \underline{4} = \underline{10}$$

7)



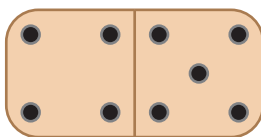
$$\underline{5} + \underline{6} = \underline{11}$$

8)



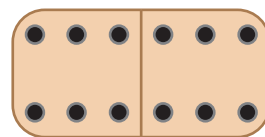
$$\underline{2} + \underline{5} = \underline{7}$$

9)



$$\underline{4} + \underline{5} = \underline{9}$$

10)



$$\underline{6} + \underline{6} = \underline{12}$$