



# Domino Addition


Sheet 2

Count the number of dots on each domino, add and write the answer.




$$\underline{\quad} + \underline{\quad} = \underline{\quad}$$

$$\underline{\quad} + \underline{\quad} = \underline{\quad}$$




$$\underline{\quad} + \underline{\quad} = \underline{\quad}$$

$$\underline{\quad} + \underline{\quad} = \underline{\quad}$$




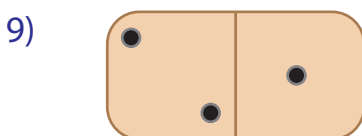
$$\underline{\quad} + \underline{\quad} = \underline{\quad}$$

$$\underline{\quad} + \underline{\quad} = \underline{\quad}$$



$$\underline{\quad} + \underline{\quad} = \underline{\quad}$$

$$\underline{\quad} + \underline{\quad} = \underline{\quad}$$



$$\underline{\quad} + \underline{\quad} = \underline{\quad}$$

$$\underline{\quad} + \underline{\quad} = \underline{\quad}$$

## PREVIEW

Gain complete access to the largest  
collection of worksheets in all subjects!

Members, please  
log in to  
download this  
worksheet.


Not a member?  
Please sign up to  
gain complete  
access.

[www.mathworksheets4kids.com](http://www.mathworksheets4kids.com)


# Domino Addition

Sheet 2


Count the number of dots on each domino, add and write the answer.




$$\underline{6} + \underline{3} = \underline{9}$$




$$\underline{6} + \underline{5} = \underline{11}$$



$$\underline{3} + \underline{4} = \underline{7}$$




$$\underline{5} + \underline{5} = \underline{10}$$



$$\underline{4} + \underline{4} = \underline{8}$$



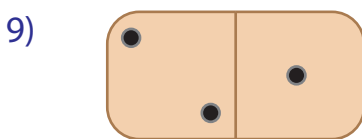
$$\underline{6} + \underline{2} = \underline{8}$$




$$\underline{1} + \underline{3} = \underline{4}$$



$$\underline{2} + \underline{2} = \underline{4}$$



$$\underline{2} + \underline{1} = \underline{3}$$



$$\underline{5} + \underline{2} = \underline{7}$$

## PREVIEW

Gain complete access to the largest  
collection of worksheets in all subjects!

Members, please  
log in to  
download this  
worksheet.

Not a member?  
Please sign up to  
gain complete  
access.

[www.mathworksheets4kids.com](http://www.mathworksheets4kids.com)