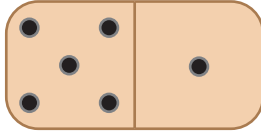


# Domino Addition

Sheet 3


Count the number of dots on each domino, add and write the answer.

1)



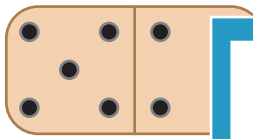
$$\underline{\quad} + \underline{\quad} = \underline{\quad}$$

2)



$$\underline{\quad} + \underline{\quad} = \underline{\quad}$$

3)



$$\underline{\quad} + \underline{\quad} = \underline{\quad}$$

## PREVIEW

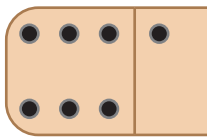
Gain complete access to the largest  
collection of worksheets in all subjects!

Members, please  
log in to  
download this  
worksheet.

Not a member?  
Please sign up to  
gain complete  
access.

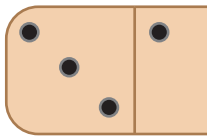
[www.mathworksheets4kids.com](http://www.mathworksheets4kids.com)

5)



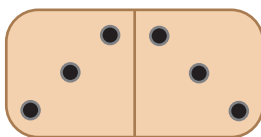
$$\underline{\quad} + \underline{\quad} = \underline{\quad}$$

7)



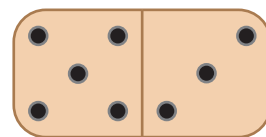
$$\underline{\quad} + \underline{\quad} = \underline{\quad}$$

9)



$$\underline{\quad} + \underline{\quad} = \underline{\quad}$$

10)

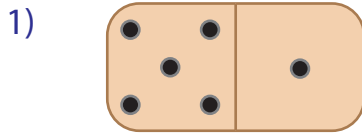


$$\underline{\quad} + \underline{\quad} = \underline{\quad}$$


# Domino Addition

Sheet 3

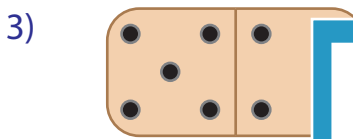
Count the number of dots on each domino, add and write the answer.



$$\underline{5} + \underline{1} = \underline{6}$$




$$\underline{1} + \underline{2} = \underline{3}$$



$$\underline{5} + \underline{2} = \underline{7}$$




$$\underline{1} + \underline{6} = \underline{7}$$



$$\underline{6} + \underline{2} = \underline{8}$$



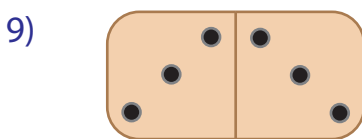
$$\underline{2} + \underline{2} = \underline{4}$$




$$\underline{3} + \underline{3} = \underline{6}$$



$$\underline{6} + \underline{4} = \underline{10}$$



$$\underline{3} + \underline{3} = \underline{6}$$



$$\underline{5} + \underline{3} = \underline{8}$$

## PREVIEW

Gain complete access to the largest  
collection of worksheets in all subjects!

Members, please  
log in to  
download this  
worksheet.

Not a member?  
Please sign up to  
gain complete  
access.

[www.mathworksheets4kids.com](http://www.mathworksheets4kids.com)