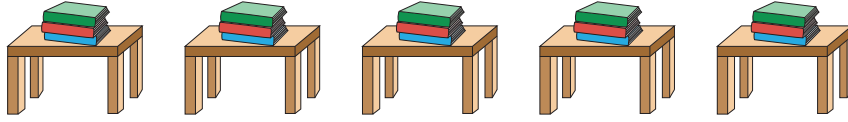


Picture Addition


Sheet 1

- 1) There are 3 books on each table. How many books are there altogether?



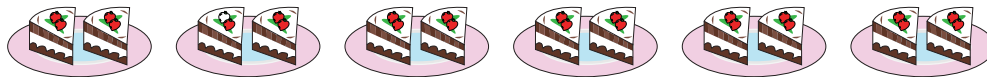
_____ books

- 2) There are 4 hot dogs in a box. How many hot dogs are in total?




_____ hot dogs

- 3) Each plate has 2 pastries. How many pastries are there altogether?



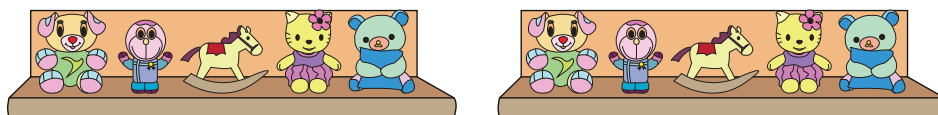
_____ pastries

- 4) There are 7 balls in a ball cage. How many balls are there altogether?



_____ balls

- 5) A shelf has 5 toys. How many toys are there altogether?

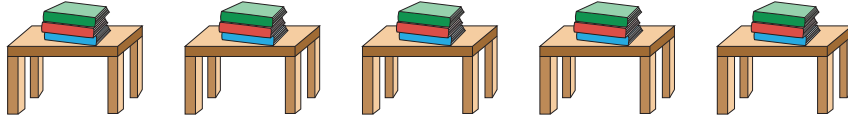


_____ toys

Picture Addition

Sheet 1

- 1) There are 3 books on each table. How many books are there altogether?



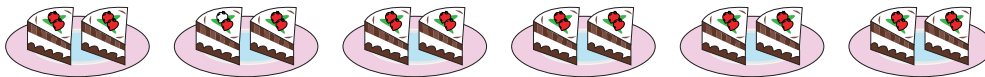
15 books

- 2) There are 4 hot dogs in a box. How many hot dogs are in total?



16 hot dogs

- 3) Each plate has 2 pastries. How many pastries are there altogether?



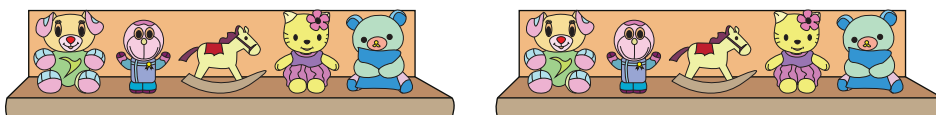
12 pastries

- 4) There are 7 balls in a ball cage. How many balls are there altogether?



21 balls

- 5) A shelf has 5 toys. How many toys are there altogether?



10 toys