


# Picture Addition

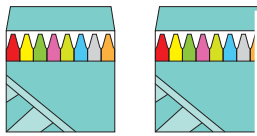
Sheet 2

- 1) There are 4 fish in a fish pot. How many fish are there altogether?




\_\_\_\_\_ fish

- 2) A pack has 8 crayons. How many crayons are in total?



\_\_\_\_\_ cra

- 3) There are 7 pearls




\_\_\_\_\_ pe

- 4) A chocolate box



\_\_\_\_\_ chocolates

- 5) Each branch has two owls. How many owls are in total?



\_\_\_\_\_ Owls

## PREVIEW

Gain complete access to the largest collection of worksheets in all subjects!

Members, please  
log in to  
download this  
worksheet.

Not a member?  
Please sign up to  
gain complete  
access.

[www.mathworksheets4kids.com](http://www.mathworksheets4kids.com)


together?

there in total?

# Picture Addition

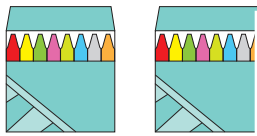
Sheet 2

- 1) There are 4 fish in a fish pot. How many fish are there altogether?




20 fish

- 2) A pack has 8 crayons. How many crayons are in total?



24 crayons

- 3) There are 7 pearls in a necklace. How many pearls are there altogether?




14 pearls

- 4) A chocolate box contains 15 chocolates. How many chocolates are there in total?



30 chocolates

- 5) Each branch has two owls. How many owls are in total?



8 Owls

## PREVIEW

Gain complete access to the largest collection of worksheets in all subjects!

Members, please log in to download this worksheet.

Not a member? Please sign up to gain complete access.

[www.mathworksheets4kids.com](http://www.mathworksheets4kids.com)