

# Picture Addition


Sheet 3

- 1) There are 5 tea cups in a tray. How many cups are in total?




\_\_\_\_\_ cups

- 2) A chair has 4 legs. How many legs are in total?



\_\_\_\_\_ legs

- 3) There are 6 petals



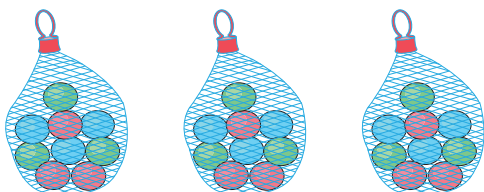
\_\_\_\_\_ petals

- 4) A bat has 2 wings



\_\_\_\_\_ wings

- 5) There are 9 marbles in a bag. How many marbles are in total?



\_\_\_\_\_ marbles

## PREVIEW

Gain complete access to the largest collection of worksheets in all subjects!

Members, please log in to download this worksheet.

Not a member? Please sign up to gain complete access.

[www.mathworksheets4kids.com](http://www.mathworksheets4kids.com)

# Picture Addition


Sheet 3

- 1) There are 5 tea cups in a tray. How many cups are in total?




25 cups

- 2) A chair has 4 legs. How many legs are in total?



8 legs

- 3) There are 6 petals



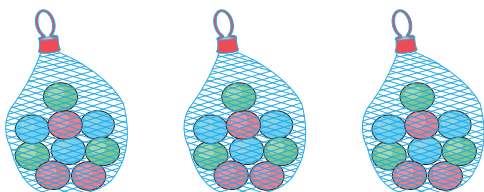
18 petals

- 4) A bat has 2 wings



10 wings

- 5) There are 9 marbles in a bag. How many marbles are in total?



27 marbles

# PREVIEW

Gain complete access to the largest collection of worksheets in all subjects!

Members, please log in to download this worksheet.

Not a member? Please sign up to gain complete access.

[www.mathworksheets4kids.com](http://www.mathworksheets4kids.com)