

# Addition Sentence

Sums up to 10: S1

Write the addition sentence.

1)



+



\_\_\_\_\_


+

\_\_\_\_\_

=

\_\_\_\_\_

2)




\_\_\_\_\_

# PREVIEW

=

\_\_\_\_\_

3)



\_\_\_\_\_

Gain complete access to the largest  
collection of worksheets in all subjects!

=

\_\_\_\_\_

4)



\_\_\_\_\_


+

\_\_\_\_\_

=


\_\_\_\_\_

5)



\_\_\_\_\_

+



\_\_\_\_\_

=

\_\_\_\_\_

# Addition Sentence

Sums up to 10: S1

Write the addition sentence.

1)



+

3


+

2

=

5


2)

5

=

8

3)

2

=

4

4)

1


+

5


=

6

5)



+

6

+

4

=

10

# PREVIEW

Gain complete access to the largest  
collection of worksheets in all subjects!

Members, please  
log in to  
download this  
worksheet.

Not a member?  
Please sign up to  
gain complete  
access.

[www.mathworksheets4kids.com](http://www.mathworksheets4kids.com)