

Addition Sentence


Sums up to 10: S2

Write the addition sentence.

1)



+



+

=

2)



PREVIEW

Gain complete access to the largest
collection of worksheets in all subjects!

Members, please
log in to
download this
worksheet.

Not a member?
Please sign up to
gain complete
access.

www.mathworksheets4kids.com

=

3)



=

4)



+

=

5)



+



=

Addition Sentence


Sums up to 10: S2

Write the addition sentence.

1)



+

1

+

2

=

3


2)

3

=

7

3)

6

=

9

4)

4

+

1

=

5

5)



+

2

+

4

=

6

PREVIEW

Gain complete access to the largest collection of worksheets in all subjects!

Members, please log in to download this worksheet.

Not a member? Please sign up to gain complete access.

www.mathworksheets4kids.com