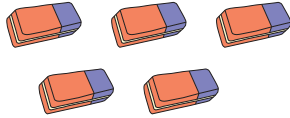


Addition Sentence

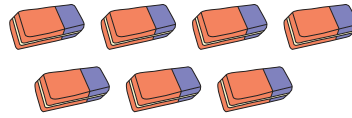
Sums up to 20: S1

Write the addition sentence.

1)



+



+

=

2)



PREVIEW

Gain complete access to the largest
collection of worksheets in all subjects!

Members, please
log in to
download this
worksheet.

Not a member?
Please sign up to
gain complete
access.

www.mathworksheets4kids.com


=

3)



=

4)




+

=

5)



+



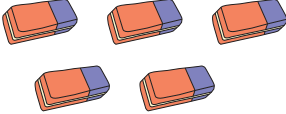
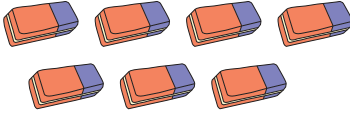
+

=

Addition Sentence

Sums up to 20: S1


Write the addition sentence.

1)  +  =


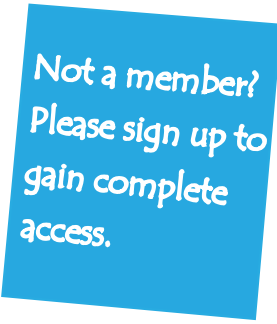
$$\underline{5} + \underline{7} = \underline{12}$$

2)  =



$$\underline{8} = \underline{17}$$

3)  =

$$\underline{6} = \underline{20}$$

4)  +  =

$$\underline{7} + \underline{2} = \underline{9}$$

5)  +  =

$$\underline{1} + \underline{4} = \underline{5}$$

PREVIEW

Gain complete access to the largest collection of worksheets in all subjects!

Members, please log in to download this worksheet.

Not a member? Please sign up to gain complete access.

www.mathworksheets4kids.com