


# Addition Sentence


Sums up to 20: S2

Write the addition sentence.

1)



+



+


\_\_\_\_\_

\_\_\_\_\_

=

\_\_\_\_\_

2)



\_\_\_\_\_

# PREVIEW

Gain complete access to the largest  
collection of worksheets in all subjects!

Members, please  
log in to  
download this  
worksheet.


Not a member?  
Please sign up to  
gain complete  
access.

[www.mathworksheets4kids.com](http://www.mathworksheets4kids.com)

=

\_\_\_\_\_

3)



\_\_\_\_\_

=

\_\_\_\_\_

4)



\_\_\_\_\_


+

\_\_\_\_\_

=


\_\_\_\_\_

5)



\_\_\_\_\_

+



\_\_\_\_\_

=


\_\_\_\_\_

# Addition Sentence


Sums up to 20: S2

Write the addition sentence.

1)



+

4

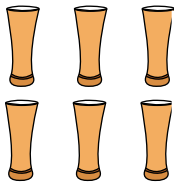
+

4

=

8


2)

7

=

13

3)

11

=

19

4)

5


+

13


=

18

5)



+

4

+

6

=

10

## PREVIEW

Gain complete access to the largest  
collection of worksheets in all subjects!

Members, please  
log in to  
download this  
worksheet.

Not a member?  
Please sign up to  
gain complete  
access.

www.mathworksheets4kids.com