



Addition Sentence

Sums up to 20: S3


Write the addition sentence.

1)  +  = _____

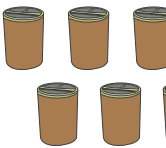
_____ + _____ = _____

2)  = _____



_____ = _____

3)  = _____

_____ = _____

4)  + _____ = _____

_____ + _____ = _____

5)  +  = _____

_____ + _____ = _____

PREVIEW

Gain complete access to the largest collection of worksheets in all subjects!

Members, please log in to download this worksheet.



Not a member? Please sign up to gain complete access.

www.mathworksheets4kids.com

Addition Sentence

Sums up to 20: S3


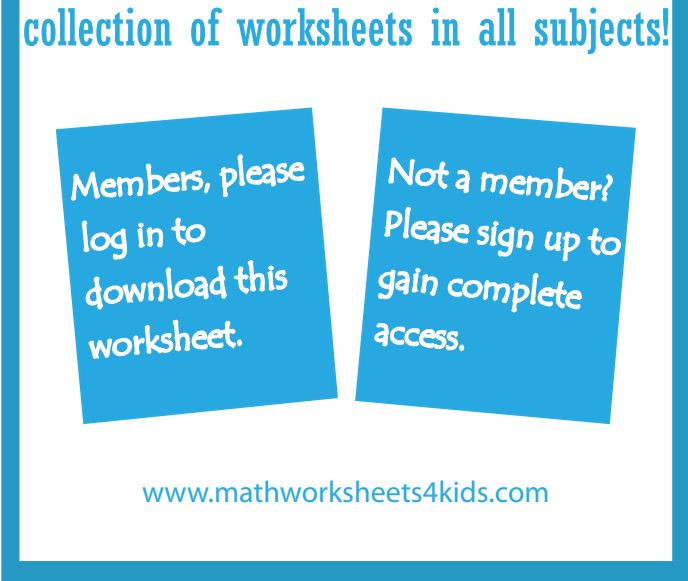
Write the addition sentence.

1)  + 

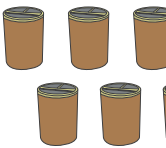
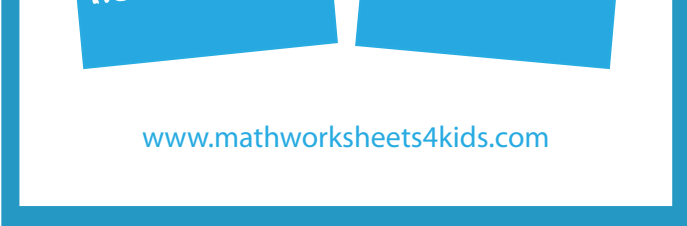
$$\underline{12} + \underline{8} = \underline{20}$$

2)  + 



$$\underline{3} + \underline{13} = \underline{16}$$

3)  + 

$$\underline{9} + \underline{5} = \underline{14}$$

4)  + 

$$\underline{7} + \underline{4} = \underline{11}$$

5)  + 

$$\underline{5} + \underline{10} = \underline{15}$$

PREVIEW

Gain complete access to the largest collection of worksheets in all subjects!

Members, please log in to download this worksheet.

Not a member? Please sign up to gain complete access.

www.mathworksheets4kids.com