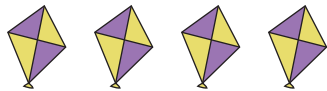


Addition Sentence

Sums up to 5: S2

Write the addition sentence.

1)




+



+

=

2)



PREVIEW

Gain complete access to the largest
collection of worksheets in all subjects!

Members, please
log in to
download this
worksheet.

Not a member?
Please sign up to
gain complete
access.

www.mathworksheets4kids.com

=

3)



=

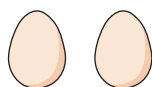
4)



+

=

5)



+



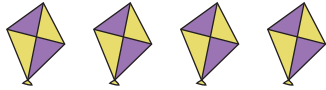
=

Addition Sentence

Sums up to 5: S2

Write the addition sentence.

1)



+

4


+

1

=

5

2)

2

=

4

3)

1

=

5

4)

2

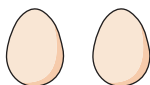
+

1

=

3

5)



+

2

+

3

=

5

PREVIEW

Gain complete access to the largest collection of worksheets in all subjects!

Members, please log in to download this worksheet.

Not a member? Please sign up to gain complete access.

www.mathworksheets4kids.com