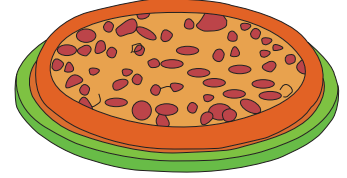



Addition up to 20

- 1) Jessica ordered two pizzas, a large pizza with 8 slices and a small pizza with 6 slices. How many slices of pizza were there in total?




- 2) Liam and his father went fishing. Liam caught 3 bass fish and his father caught 5 bass fish. How many bass fish did they catch in all?



- 3) Robert borrowed a book with 9 chapters on Sunday. He finished 5 chapters on Saturday and the weekend?



- 4) Billie had 9 papaya saplings. She planted 4 more.



- 5) Coach Michael has 3 rugby balls and 8 soccer balls. How many balls does he have in all?



PREVIEW

Gain complete access to the largest
collection of worksheets in all subjects!

Members, please
log in to
download this
worksheet.

Not a member?
Please sign up to
gain complete
access.

www.mathworksheets4kids.com