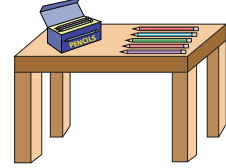



Addition up to 20


- 1) After tea, it was time for Millie and friends to play bingo. She looked around for pencils and found 7 on her desk and 4 in her pencil case. How many pencils did she find in all?



- 2) During the first round of a quiz competition, Millie got 5 questions right while her teammate, Jonathan, got 3 right. How many questions did they get right in all?




- 3) Ava and her friends had 5 sandwiches and 3 soft drinks. How many items did they have in all?



- 4) Harris bought a 5-ounce bag of coconut cookies. How much did the bag weigh in all?



- 5) Luna collected 4 seashells. Nancy collected 9 more than Luna. How many seashells did they collect altogether?



PREVIEW

Gain complete access to the largest
collection of worksheets in all subjects!

Members, please
log in to
download this
worksheet.

Not a member?
Please sign up to
gain complete
access.

www.mathworksheets4kids.com