



- 1) Emily collects 3 pine cones. Her brother James gives her 2 more. How many pine cones does Emily have altogether?




- 2) Daniel bought two crates of milk. One crate had 10 milk cartons in it and the other crate had 9 milk cartons in it. How many milk cartons did he have in all?




- 3) Lily has 6 smiley stickers. Her friend Tom has 4 smiley stickers. How many stickers do they have in all?



- 4) There are 3 girls and 12 boys in a class. How many children are there in the class?



- 5) On a weekday, the women and children coach in a tube train had 9 women and 6 children. How many passengers were onboard the coach?



PREVIEW

Gain complete access to the largest
collection of worksheets in all subjects!

Members, please
log in to
download this
worksheet.

Not a member?
Please sign up to
gain complete
access.

www.mathworksheets4kids.com