


Missing Addend



Column: S3

Find the missing addend in each problem.

$$\begin{array}{r} 1) \quad 5 \\ + \quad \square \\ \hline 6 \end{array}$$

$$\begin{array}{r} 2) \quad \square \\ + \quad 9 \\ \hline 12 \end{array}$$

$$\begin{array}{r} 3) \quad 6 \\ + \quad \square \\ \hline 9 \end{array}$$

$$\begin{array}{r} 4) \quad \square \\ + \quad 7 \\ \hline 11 \end{array}$$

$$\begin{array}{r} 5) \quad \square \\ + \quad 3 \\ \hline 5 \end{array}$$

$$\begin{array}{r} 8) \quad 3 \\ + \quad \square \\ \hline 9 \end{array}$$

$$\begin{array}{r} 9) \quad 1 \\ + \quad \square \\ \hline 8 \end{array}$$

$$\begin{array}{r} 12) \quad \square \\ + \quad 4 \\ \hline 13 \end{array}$$

$$\begin{array}{r} 13) \quad \square \\ + \quad 5 \\ \hline 8 \end{array}$$

www.mathworksheets4kids.com

$$\begin{array}{r} 16) \quad \square \\ + \quad 7 \\ \hline 10 \end{array}$$

$$\begin{array}{r} 17) \quad 4 \\ + \quad \square \\ \hline 6 \end{array}$$

$$\begin{array}{r} 18) \quad \square \\ + \quad 7 \\ \hline 14 \end{array}$$

$$\begin{array}{r} 19) \quad 8 \\ + \quad \square \\ \hline 11 \end{array}$$

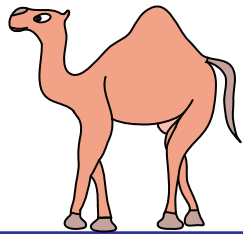

$$\begin{array}{r} 20) \quad \square \\ + \quad 4 \\ \hline 9 \end{array}$$

PREVIEW

Gain complete access to the largest collection of worksheets in all subjects!

Members, please log in to download this worksheet.

Not a member? Please sign up to gain complete access.

Answer Key**Missing Addend**

Column: S3

Find the missing addend in each problem.

$$\begin{array}{r} 1) \quad 5 \\ + \quad \boxed{1} \\ \hline 6 \end{array}$$

$$\begin{array}{r} 2) \quad \boxed{3} \\ + \quad 9 \\ \hline 12 \end{array}$$

$$\begin{array}{r} 3) \quad 6 \\ + \quad \boxed{2} \\ \hline 8 \end{array}$$

$$\begin{array}{r} 4) \quad \boxed{4} \\ + \quad 7 \\ \hline 11 \end{array}$$

$$\begin{array}{r} 5) \quad \boxed{2} \\ + \quad 3 \\ \hline 5 \end{array}$$

$$\begin{array}{r} 8) \quad 3 \\ + \quad \boxed{6} \\ \hline 9 \end{array}$$

$$\begin{array}{r} 9) \quad 1 \\ + \quad \boxed{7} \\ \hline 8 \end{array}$$

$$\begin{array}{r} 12) \quad \boxed{9} \\ + \quad 4 \\ \hline 13 \end{array}$$

$$\begin{array}{r} 13) \quad \boxed{3} \\ + \quad 5 \\ \hline 8 \end{array}$$

www.mathworksheets4kids.com

$$\begin{array}{r} 16) \quad \boxed{3} \\ + \quad 7 \\ \hline 10 \end{array}$$

$$\begin{array}{r} 17) \quad 4 \\ + \quad \boxed{2} \\ \hline 6 \end{array}$$

$$\begin{array}{r} 18) \quad \boxed{7} \\ + \quad 7 \\ \hline 14 \end{array}$$

$$\begin{array}{r} 19) \quad 8 \\ + \quad \boxed{3} \\ \hline 11 \end{array}$$

$$\begin{array}{r} 20) \quad \boxed{5} \\ + \quad 4 \\ \hline 9 \end{array}$$

PREVIEW

Gain complete access to the largest
collection of worksheets in all subjects!

Members, please
log in to
download this
worksheet.

Not a member?
Please sign up to
gain complete
access.