


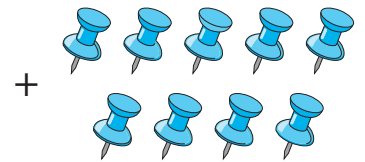
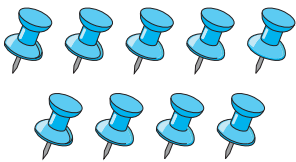
Addition up to 20

Write the addition equation represented by each model.


1)




2)



3)



4)



_____ + _____ = _____ + _____

PREVIEWGain complete access to the largest
collection of worksheets in all subjects!Members, please
log in to
download this
worksheet.Not a member?
Please sign up to
gain complete
access.www.mathworksheets4kids.com