





Addition up to 20

Write the addition equation represented by each model.

1)  +  =  + 

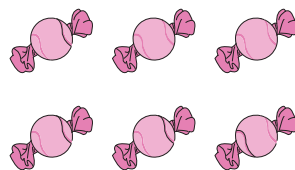
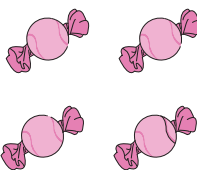
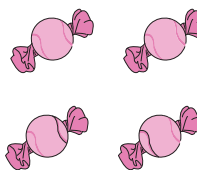

_____ + _____ = _____ + _____

2)  + 

_____ + _____

4)  + 

_____ + _____

3)  +  =  + 

_____ + _____ = _____ + _____

PREVIEWGain complete access to the largest
collection of worksheets in all subjects!Members, please
log in to
download this
worksheet.Not a member?
Please sign up to
gain complete
access.www.mathworksheets4kids.com