


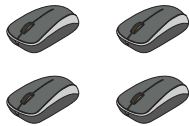
**Addition up to 20**

Write the addition equation represented by each model.

1)

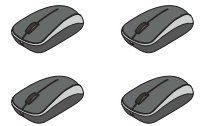


2)




+ \_\_\_\_\_

+




+

3)

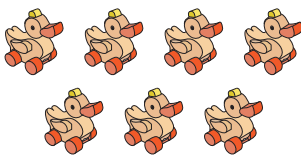


+

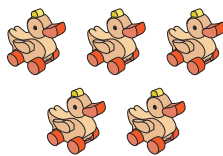


+

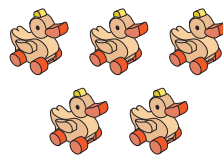
4)



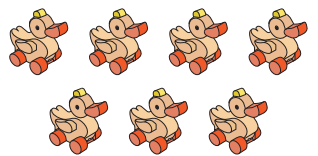
+



=



+



+

**PREVIEW**Gain complete access to the largest  
collection of worksheets in all subjects!Members, please  
log in to  
download this  
worksheet.Not a member?  
Please sign up to  
gain complete  
access.[www.mathworksheets4kids.com](http://www.mathworksheets4kids.com)