

Single-Digit Addition

Column: S2

1)
$$\begin{array}{r} 9 \\ + 5 \\ \hline \end{array}$$

2)
$$\begin{array}{r} 4 \\ + 6 \\ \hline \end{array}$$

3)
$$\begin{array}{r} 8 \\ + 5 \\ \hline \end{array}$$

4)
$$\begin{array}{r} 1 \\ + 2 \\ \hline \end{array}$$

5)
$$\begin{array}{r} 6 \\ + 6 \\ \hline \end{array}$$

6)
$$\begin{array}{r} 3 \\ + 2 \\ \hline \end{array}$$

8)
$$\begin{array}{r} 7 \\ + 9 \\ \hline \end{array}$$

9)
$$\begin{array}{r} 4 \\ + 1 \\ \hline \end{array}$$

12)
$$\begin{array}{r} 0 \\ + 8 \\ \hline \end{array}$$


PREVIEW

Gain complete access to the largest collection of worksheets in all subjects!

Members, please log in to download this worksheet.


Not a member? Please sign up to gain complete access.

www.mathworksheets4kids.com



- 13) Jose has 4 hot dogs. Dennis has 3 hot dogs. How many hot dogs do they have altogether?

- 14) Kathy bought 2 hot dogs. Dennis bought 3 hot dogs. How many hot dogs did they buy altogether?



Single-Digit Addition

Column: S2

$$\begin{array}{r} 1) \quad 9 \\ + \quad 5 \\ \hline \quad 14 \end{array}$$

$$\begin{array}{r} 2) \quad 4 \\ + \quad 6 \\ \hline \quad 10 \end{array}$$

$$\begin{array}{r} 3) \quad 8 \\ + \quad 5 \\ \hline \quad 13 \end{array}$$

$$\begin{array}{r} 4) \quad 1 \\ + \quad 2 \\ \hline \quad 3 \end{array}$$

$$\begin{array}{r} 5) \quad 6 \\ + \quad 6 \\ \hline \quad 12 \end{array}$$

$$\begin{array}{r} 6) \quad 3 \\ + \quad 3 \\ \hline \quad 6 \end{array}$$

$$\begin{array}{r} 7) \quad 2 \\ + \quad 2 \\ \hline \quad 4 \end{array}$$

$$\begin{array}{r} 8) \quad 7 \\ + \quad 9 \\ \hline \quad 16 \end{array}$$

$$\begin{array}{r} 9) \quad 4 \\ + \quad 1 \\ \hline \quad 5 \end{array}$$


$$\begin{array}{r} 12) \quad 0 \\ + \quad 8 \\ \hline \quad 8 \end{array}$$

Gain complete access to the largest collection of worksheets in all subjects!

Members, please log in to download this worksheet.

Not a member? Please sign up to gain complete access.


www.mathworksheets4kids.com



- 13) Jose has 4 hot dogs. Dennis has 2 hot dogs. How many hot dogs do they have altogether?

6

- 14) Kathy bought 2 hot dogs. Dennis bought 3 hot dogs. How many hot dogs did they buy altogether?



5