

Addition

Regrouping: S2

$$\begin{array}{r} 1) \quad 42 \\ + 196 \\ \hline \end{array}$$

$$\begin{array}{r} 2) \quad 79 \\ + 643 \\ \hline \end{array}$$

$$\begin{array}{r} 3) \quad 18 \\ + 237 \\ \hline \end{array}$$

$$\begin{array}{r} 4) \quad 392 \\ + 45 \\ \hline \end{array}$$

$$\begin{array}{r} 5) \quad 826 \\ + 28 \\ \hline \end{array}$$

$$6) \quad 107$$

$$7) \quad 486$$

$$\begin{array}{r} 8) \quad 64 \\ + 576 \\ \hline \end{array}$$

$$\begin{array}{r} 9) \quad 17 \\ + 678 \\ \hline \end{array}$$

$$\begin{array}{r} 12) \quad 340 \\ + 93 \\ \hline \end{array}$$

PREVIEW

Access the largest collection of worksheets for just **\$19.95** per year!


Members, please log in to download this worksheet.

Log in

Not a member? Please sign up to gain complete access.


Sign up

www.mathworksheets4kids.com



- 13) Brenda scored 42 points in a game. Jack scored 196 points. How many more points did Jack score than Brenda?
- _____

- 14) Jack spent 483 minutes in stone carving. He took 51 minutes to paint it. How much time did he spend to create the sculpture?
- _____



Answer Key**Addition**

Regrouping: S2

$$\begin{array}{r} 1) \quad 42 \\ + 196 \\ \hline 238 \end{array}$$

$$\begin{array}{r} 2) \quad 79 \\ + 643 \\ \hline 722 \end{array}$$

$$\begin{array}{r} 3) \quad 18 \\ + 237 \\ \hline 255 \end{array}$$

$$\begin{array}{r} 4) \quad 392 \\ + 45 \\ \hline 437 \end{array}$$

$$\begin{array}{r} 5) \quad 826 \\ + 28 \\ \hline 854 \end{array}$$

$$6) \quad 107$$

$$7) \quad 486$$

$$\begin{array}{r} 8) \quad 64 \\ + 576 \\ \hline 640 \end{array}$$

$$\begin{array}{r} 9) \quad 17 \\ + 678 \\ \hline 695 \end{array}$$

$$\begin{array}{r} 12) \quad 340 \\ + 93 \\ \hline 433 \end{array}$$

Access the largest collection of worksheets for just **\$19.95** per year!


Members, please log in to download this worksheet.

Log in

Not a member? Please sign up to gain complete access.

Sign up

www.mathworksheets4kids.com



- 13) Brenda scored 429 points. How many points did she score by 62 points?

429

How many points did she score by 62 points?

- 14) Jack spent 483 minutes in stone carving. He took 51 minutes to paint it. How much time did he spend to create the sculpture?

534

