

3-Digit Addition

Regrouping: S1

$$\begin{array}{r} 1) \quad 826 \\ + 917 \\ \hline \end{array}$$

$$\begin{array}{r} 2) \quad 743 \\ + 521 \\ \hline \end{array}$$

$$\begin{array}{r} 3) \quad 357 \\ + 149 \\ \hline \end{array}$$

$$\begin{array}{r} 4) \quad 516 \\ + 468 \\ \hline \end{array}$$

$$\begin{array}{r} 5) \quad 193 \\ + 275 \\ \hline \end{array}$$

$$6) \quad 432$$

$$7) \quad 924$$

$$\begin{array}{r} 8) \quad 871 \\ + 654 \\ \hline \end{array}$$

$$\begin{array}{r} 9) \quad 547 \\ + 792 \\ \hline \end{array}$$

Access the largest collection of worksheets for just **\$19.95** per year!

Members, please
log in to
download this
worksheet.

Log in

Not a member?
Please sign up to
gain complete
access.


Sign up

www.mathworksheets4kids.com


$$\begin{array}{r} 12) \quad 639 \\ + 842 \\ \hline \end{array}$$

- 13) Kim ordered
Charlie's Cookies
she order in t

ookies from
okies did



- 14) In an auditorium, there are 150 seats on the right and 150 seats on the left. How many people can sit in the auditorium?



3-Digit Addition

Regrouping: S1

$$\begin{array}{r} 1) \quad 826 \\ + 917 \\ \hline 1743 \end{array}$$

$$\begin{array}{r} 2) \quad 743 \\ + 521 \\ \hline 1264 \end{array}$$

$$\begin{array}{r} 3) \quad 357 \\ + 149 \\ \hline 506 \end{array}$$

$$\begin{array}{r} 4) \quad 516 \\ + 468 \\ \hline 984 \end{array}$$

$$\begin{array}{r} 5) \quad 193 \\ + 275 \\ \hline 468 \end{array}$$

$$6) \quad 432$$

$$7) \quad 924$$

$$\begin{array}{r} 8) \quad 871 \\ + 654 \\ \hline 1525 \end{array}$$

$$\begin{array}{r} 9) \quad 547 \\ + 792 \\ \hline 1339 \end{array}$$

Access the largest collection of
worksheets for just **\$19.95** per year!

Members, please
log in to
download this
worksheet.

Log in

Not a member?
Please sign up to
gain complete
access.


Sign up

www.mathworksheets4kids.com

$$\begin{array}{r} 12) \quad 639 \\ + 842 \\ \hline 1481 \end{array}$$


- 13) Kim ordered
Charlie's Cookies
she order in t

cookies from
cookies did



610

- 14) In an auditorium, there are 150 seats on the right and 150 seats on the left. How many people can sit in the auditorium?



300

Name: _____

Score: _____

3-Digit Addition

Regrouping: S2

$$\begin{array}{r} 1) \quad 623 \\ + 349 \\ \hline \end{array}$$

$$\begin{array}{r} 2) \quad 279 \\ + 758 \\ \hline \end{array}$$

$$\begin{array}{r} 3) \quad 936 \\ + 812 \\ \hline \end{array}$$

$$\begin{array}{r} 4) \quad 457 \\ + 193 \\ \hline \end{array}$$

$$\begin{array}{r} 5) \quad 594 \\ + 231 \\ \hline \end{array}$$

$$\begin{array}{r} 6) \quad 185 \\ + 724 \\ \hline \end{array}$$

$$\begin{array}{r} 7) \quad 724 \\ + 863 \\ \hline \end{array}$$

$$\begin{array}{r} 8) \quad 371 \\ + 863 \\ \hline \end{array}$$

$$\begin{array}{r} 9) \quad 947 \\ + 473 \\ \hline \end{array}$$

$$\begin{array}{r} 12) \quad 251 \\ + 149 \\ \hline \end{array}$$

PREVIEW


Access the largest collection of worksheets for just **\$19.95** per year!

Members, please log in to download this worksheet. **Log in**


Not a member? Please sign up to gain complete access. **Sign up**

www.mathworksheets4kids.com

13) Jim saved 30 dollars for Christmas. How much more does he need to buy a piggy bank for 45 dollars?



14) Louise has read 249 pages in a science fiction novel. She is yet to read 163 pages. How many pages are in the book?



3-Digit Addition

Regrouping: S2

$$\begin{array}{r} 1) \quad 623 \\ + 349 \\ \hline \mathbf{972} \end{array}$$

$$\begin{array}{r} 2) \quad 279 \\ + 758 \\ \hline \mathbf{1037} \end{array}$$

$$\begin{array}{r} 3) \quad 936 \\ + 812 \\ \hline \mathbf{1748} \end{array}$$

$$\begin{array}{r} 4) \quad 457 \\ + 193 \\ \hline \mathbf{650} \end{array}$$

$$\begin{array}{r} 5) \quad 594 \\ + 231 \\ \hline \mathbf{825} \end{array}$$

$$6) \quad 185$$

$$7) \quad 724$$

$$\begin{array}{r} 8) \quad 371 \\ + 863 \\ \hline \mathbf{1234} \end{array}$$

$$\begin{array}{r} 9) \quad 947 \\ + 473 \\ \hline \mathbf{1420} \end{array}$$

$$\begin{array}{r} 12) \quad 251 \\ + 149 \\ \hline \mathbf{400} \end{array}$$

Access the largest collection of worksheets for just **\$19.95** per year!


Members, please log in to download this worksheet.

Log in

Not a member? Please sign up to gain complete access.

Sign up

www.mathworksheets4kids.com




- 13) Jim saved 30...
Christmas. Ho

¢ 580

iggy bank for
?

- 14) Louise has read 249 pages in a science fiction novel. She is yet to read 163 pages. How many pages are in the book?

412



Name: _____

Score: _____

3-Digit Addition

Regrouping: S3

1)
$$\begin{array}{r} 285 \\ + 537 \\ \hline \end{array}$$

2)
$$\begin{array}{r} 952 \\ + 374 \\ \hline \end{array}$$

3)
$$\begin{array}{r} 768 \\ + 191 \\ \hline \end{array}$$

4)
$$\begin{array}{r} 418 \\ + 625 \\ \hline \end{array}$$

5)
$$\begin{array}{r} 806 \\ + 713 \\ \hline \end{array}$$

6)
$$\begin{array}{r} 630 \\ + 374 \\ \hline \end{array}$$

7)
$$\begin{array}{r} 354 \\ + 191 \\ \hline \end{array}$$

8)
$$\begin{array}{r} 147 \\ + 298 \\ \hline \end{array}$$

9)
$$\begin{array}{r} 429 \\ + 184 \\ \hline \end{array}$$

12)
$$\begin{array}{r} 862 \\ + 306 \\ \hline \end{array}$$

PREVIEW

Access the largest collection of worksheets for just **\$19.95** per year!


Members, please log in to download this worksheet. **Log in**

Not a member? Please sign up to gain complete access. **Sign up**

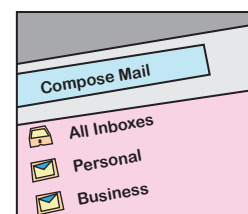
www.mathworksheets4kids.com

13) There are 132
these two typ

How many of



14) Jane's personal inbox has 357 e-mails and her business inbox has 128 e-mails. How many e-mails are in her inbox?



3-Digit Addition

Regrouping: S3

$$\begin{array}{r} 1) \quad 285 \\ + 537 \\ \hline \quad \mathbf{822} \end{array}$$

$$\begin{array}{r} 2) \quad 952 \\ + 374 \\ \hline \quad \mathbf{1326} \end{array}$$

$$\begin{array}{r} 3) \quad 768 \\ + 191 \\ \hline \quad \mathbf{959} \end{array}$$

$$\begin{array}{r} 4) \quad 418 \\ + 625 \\ \hline \quad \mathbf{1043} \end{array}$$

$$\begin{array}{r} 5) \quad 806 \\ + 713 \\ \hline \quad \mathbf{1519} \end{array}$$

$$6) \quad 630$$

$$7) \quad 354$$

$$\begin{array}{r} 8) \quad 147 \\ + 298 \\ \hline \quad \mathbf{445} \end{array}$$

$$\begin{array}{r} 9) \quad 429 \\ + 184 \\ \hline \quad \mathbf{613} \end{array}$$

Access the largest collection of worksheets for just **\$19.95** per year!

Members, please log in to download this worksheet.

Log in

Not a member? Please sign up to gain complete access.

Sign up


www.mathworksheets4kids.com

$$\begin{array}{r} 12) \quad 862 \\ + 306 \\ \hline \quad \mathbf{1168} \end{array}$$

- 13) There are 132
these two typ

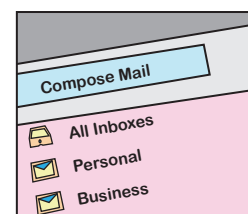
431

How many of



- 14) Jane's personal inbox has 357 e-mails and her business inbox has 128 e-mails. How many e-mails are in her inbox?

485



3-Digit Addition

Regrouping: S4

$$\begin{array}{r} 1) \quad 549 \\ + 761 \\ \hline \end{array}$$

$$\begin{array}{r} 2) \quad 862 \\ + 375 \\ \hline \end{array}$$

$$\begin{array}{r} 3) \quad 274 \\ + 452 \\ \hline \end{array}$$

$$\begin{array}{r} 4) \quad 693 \\ + 187 \\ \hline \end{array}$$

$$\begin{array}{r} 5) \quad 975 \\ + 638 \\ \hline \end{array}$$

$$6) \quad 416$$

$$7) \quad 138$$

$$\begin{array}{r} 8) \quad 359 \\ + 315 \\ \hline \end{array}$$

$$\begin{array}{r} 9) \quad 263 \\ + 824 \\ \hline \end{array}$$

$$\begin{array}{r} 12) \quad 931 \\ + 475 \\ \hline \end{array}$$

PREVIEW

Access the largest collection of worksheets for just **\$19.95** per year!

Members, please
log in to
download this
worksheet.

Log in

Not a member?
Please sign up to
gain complete
access.

Sign up


www.mathworksheets4kids.com

- 13) Hannah went to a party and bought 129 Minnie Mouse decorations. How many more decorations did she need to buy to have 200 decorations in total?
- _____

and the party
s and
ie



- 14) Brown Furniture Company manufactures 265 mid-back computer chairs and 195 mesh computer chairs in a week. In total, how many chairs do they manufacture in a week?
- _____



3-Digit Addition

Regrouping: S4

$$\begin{array}{r} 1) \quad 549 \\ + 761 \\ \hline 1310 \end{array}$$

$$\begin{array}{r} 2) \quad 862 \\ + 375 \\ \hline 1237 \end{array}$$

$$\begin{array}{r} 3) \quad 274 \\ + 452 \\ \hline 726 \end{array}$$

$$\begin{array}{r} 4) \quad 693 \\ + 187 \\ \hline 880 \end{array}$$

$$\begin{array}{r} 5) \quad 975 \\ + 638 \\ \hline 1613 \end{array}$$

$$6) \quad 416$$

$$7) \quad 138$$

$$\begin{array}{r} 8) \quad 359 \\ + 315 \\ \hline 674 \end{array}$$

$$\begin{array}{r} 9) \quad 263 \\ + 824 \\ \hline 1087 \end{array}$$

Access the largest collection of
worksheets for just **\$19.95** per year!

Members, please
log in to
download this
worksheet.

Log in

Not a member?
Please sign up to
gain complete
access.

Sign up


www.mathworksheets4kids.com

$$\begin{array}{r} 12) \quad 931 \\ + 475 \\ \hline 1406 \end{array}$$

- 13) Hannah went to a party and bought decorations. She bought 129 Minnie Mouse balloons and 118 mouse decorations.


247

How many balloons did she buy in total?



- 14) Brown Furniture Company manufactures 265 mid-back computer chairs and 195 mesh computer chairs in a week. In total, how many chairs do they manufacture in a week?

460



Name: _____

Score: _____

3-Digit Addition

Regrouping: S5

$$\begin{array}{r} 1) \quad 634 \\ + 971 \\ \hline \end{array}$$

$$\begin{array}{r} 2) \quad 416 \\ + 198 \\ \hline \end{array}$$

$$\begin{array}{r} 3) \quad 789 \\ + 252 \\ \hline \end{array}$$

$$\begin{array}{r} 4) \quad 864 \\ + 526 \\ \hline \end{array}$$

$$\begin{array}{r} 5) \quad 296 \\ + 813 \\ \hline \end{array}$$

$$6) \quad 573$$

$$7) \quad 321$$

$$\begin{array}{r} 8) \quad 954 \\ + 872 \\ \hline \end{array}$$

$$\begin{array}{r} 9) \quad 758 \\ + 685 \\ \hline \end{array}$$

$$\begin{array}{r} 12) \quad 436 \\ + 695 \\ \hline \end{array}$$

PREVIEW

Access the largest collection of worksheets for just **\$19.95** per year!

Members, please log in to download this worksheet.

Log in

Not a member? Please sign up to gain complete access.

Sign up

www.mathworksheets4kids.com

13) Ben scored 1 PlayStation. h

vel 2 in his



14) Helping Hands Charity organised a public charity drive. 974 people from New York and 879 people from Atlanta contributed in a month. How many contributions did they receive?



3-Digit Addition

Regrouping: S5

$$\begin{array}{r} 1) \quad 634 \\ + 971 \\ \hline \mathbf{1605} \end{array}$$

$$\begin{array}{r} 2) \quad 416 \\ + 198 \\ \hline \mathbf{614} \end{array}$$

$$\begin{array}{r} 3) \quad 789 \\ + 252 \\ \hline \mathbf{1041} \end{array}$$

$$\begin{array}{r} 4) \quad 864 \\ + 526 \\ \hline \mathbf{1390} \end{array}$$

$$\begin{array}{r} 5) \quad 296 \\ + 813 \\ \hline \mathbf{1109} \end{array}$$

$$6) \quad 573$$

$$7) \quad 321$$

$$\begin{array}{r} 8) \quad 954 \\ + 872 \\ \hline \mathbf{1826} \end{array}$$

$$\begin{array}{r} 9) \quad 758 \\ + 685 \\ \hline \mathbf{1443} \end{array}$$

Access the largest collection of worksheets for just **\$19.95** per year!

Members, please log in to download this worksheet.

Log in

Not a member? Please sign up to gain complete access.

Sign up

www.mathworksheets4kids.com

$$\begin{array}{r} 12) \quad 436 \\ + 695 \\ \hline \mathbf{1131} \end{array}$$

- 13) Ben scored 1 PlayStation. h

501

vel 2 in his



- 14) Helping Hands Charity organised a public charity drive. 974 people from New York and 879 people from Atlanta contributed in a month. How many contributions did they receive?

1853

