


# Addition Drill



$$\begin{array}{r} 1) \quad 10 \\ + \quad 4 \\ \hline \end{array}$$

$$\begin{array}{r} 2) \quad 15 \\ + \quad 3 \\ \hline \end{array}$$

$$\begin{array}{r} 3) \quad 2 \\ + 11 \\ \hline \end{array}$$

$$\begin{array}{r} 4) \quad 5 \\ + \quad 2 \\ \hline \end{array}$$

$$\begin{array}{r} 5) \quad 18 \\ + \quad 2 \\ \hline \end{array}$$

$$\begin{array}{r} 8) \quad 1 \\ + 10 \\ \hline \end{array}$$

$$\begin{array}{r} 9) \quad 2 \\ + \quad 2 \\ \hline \end{array}$$

$$\begin{array}{r} 12) \quad 12 \\ + \quad 6 \\ \hline \end{array}$$

$$\begin{array}{r} 13) \quad 1 \\ + 16 \\ \hline \end{array}$$

$$\begin{array}{r} 16) \quad 11 \\ + \quad 3 \\ \hline \end{array}$$

$$\begin{array}{r} 17) \quad 17 \\ + \quad 2 \\ \hline \end{array}$$

$$\begin{array}{r} 18) \quad 3 \\ + \quad 7 \\ \hline \end{array}$$

$$\begin{array}{r} 19) \quad 14 \\ + \quad 4 \\ \hline \end{array}$$

$$\begin{array}{r} 20) \quad 9 \\ + 11 \\ \hline \end{array}$$

# PREVIEW


Gain complete access to the largest  
collection of worksheets in all subjects!

Members, please  
log in to  
download this  
worksheet.


Not a member?  
Please sign up to  
gain complete  
access.

[www.mathworksheets4kids.com](http://www.mathworksheets4kids.com)

## Answer Key



# Addition Drill



$$\begin{array}{r} 1) \quad 10 \\ + \quad 4 \\ \hline 14 \end{array}$$

$$\begin{array}{r} 2) \quad 15 \\ + \quad 3 \\ \hline 18 \end{array}$$

$$\begin{array}{r} 3) \quad 2 \\ + \quad 11 \\ \hline 13 \end{array}$$

$$\begin{array}{r} 4) \quad 5 \\ + \quad 2 \\ \hline 7 \end{array}$$

$$\begin{array}{r} 5) \quad 18 \\ + \quad 2 \\ \hline 20 \end{array}$$

$$\begin{array}{r} 8) \quad 1 \\ + \quad 10 \\ \hline 11 \end{array}$$

$$\begin{array}{r} 9) \quad 2 \\ + \quad 2 \\ \hline 4 \end{array}$$

$$\begin{array}{r} 12) \quad 12 \\ + \quad 6 \\ \hline 18 \end{array}$$

$$\begin{array}{r} 13) \quad 1 \\ + \quad 16 \\ \hline 17 \end{array}$$

$$\begin{array}{r} 16) \quad 11 \\ + \quad 3 \\ \hline 14 \end{array}$$

$$\begin{array}{r} 17) \quad 17 \\ + \quad 2 \\ \hline 19 \end{array}$$

$$\begin{array}{r} 18) \quad 3 \\ + \quad 7 \\ \hline 10 \end{array}$$

$$\begin{array}{r} 19) \quad 14 \\ + \quad 4 \\ \hline 18 \end{array}$$

$$\begin{array}{r} 20) \quad 9 \\ + \quad 11 \\ \hline 20 \end{array}$$

# PREVIEW

Gain complete access to the largest collection of worksheets in all subjects!

Members, please log in to download this worksheet.

Not a member? Please sign up to gain complete access.

[www.mathworksheets4kids.com](http://www.mathworksheets4kids.com)

20

11