

Name : _____


Single Digit Addition

Sheet 1

- 1) Clara bought a necklace for \$5 and a bracelet for \$7 at a clearance sale. How much money did she spend in all?




- 2) Anna bought two buckets. One bucket can hold 6 gallons of water, and the other can hold 8 gallons. How many gallons of water can both the buckets hold together?




- 3) June and Mark went to an ice cream parlor. June ate 3 scoops of vanilla ice cream, and Mark ate 4 scoops of chocolate-chip ice cream. How many scoops of ice cream did they eat altogether?



- 4) Megan picked two cabbages and three cauliflowers from her kitchen garden. How many vegetables did she pick in all?



- 5) A box contains 9 bars of white chocolate and 9 bars of dark chocolate. How many bars of chocolate does the box have in total?



- 6) Six Blue Jays are perched on an Oak tree. Moments later, 5 more Blue Jays fly in. How many birds are perched on the tree altogether?



- 7) Andy and his father went fishing. Andy caught 6 bluegill fish, and his father caught 6 bass fish. How many fish did they catch in all?



Name : _____

Answer key

Sheet 1


Single Digit Addition

- 1) Clara bought a necklace for \$5 and a bracelet for \$7 at a clearance sale. How much money did she spend in all?



\$12

- 2) Anna bought two buckets. One bucket can hold 6 gallons of water, and the other can hold 8 gallons. How many gallons of water can both the buckets hold together?



14 gallons

- 3) June and Mark went to an ice cream parlor. June ate 3 scoops of vanilla ice cream, and Mark ate 4 scoops of chocolate-chip ice cream. How many scoops of ice cream did they eat altogether?




7 scoops

- 4) Megan picked two cabbages and three cauliflowers from her kitchen garden. How many vegetables did she pick in all?



5 vegetables

- 5) A box contains 9 bars of white chocolate and 9 bars of dark chocolate. How many bars of chocolate does the box have in total?




18 bars of chocolate

- 6) Six Blue Jays are perched on an Oak tree. Moments later, 5 more Blue Jays fly in. How many birds are perched on the tree altogether?



11 blue jays

- 7) Andy and his father went fishing. Andy caught 6 bluegill fish, and his father caught 6 bass fish. How many fish did they catch in all?



12 fish