


Name : \_\_\_\_\_

## Single Digit Addition


Sheet 2

- 1) Juan has a collection of 9 vintage paintings. If he adds 8 antique paintings to it, how many paintings are in his collection?



\_\_\_\_\_

- 2) Ethan bought 2 pounds of apples and 4 pounds of pears to make jam. How much do the fruits weigh altogether?



\_\_\_\_\_

- 3) William had 8 papaya many papaya saplings:


and 4 more saplings. How



\_\_\_\_\_

- 4) Daisy and her friends many refreshments di

es and 7 soft drinks. How



\_\_\_\_\_

- 5) Gabriel has 5 shirts in

ts are in the wardrobe?



\_\_\_\_\_

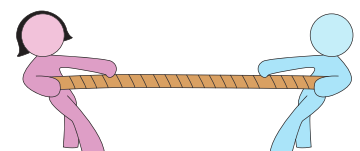
- 6) Oliver bought two crates in it. How many milk cartons did the crates hold in all?

her crate had 7 milk cartons



\_\_\_\_\_

- 7) Seven children were engaged in a game of tug of war. 3 more children joined them. How many children in all were engaged in the game?



\_\_\_\_\_

**PREVIEW**

Gain complete access to the largest collection of worksheets in all subjects!

Members, please log in to download this worksheet.

Not a member? Please sign up to gain complete access.

[www.mathworksheets4kids.com](http://www.mathworksheets4kids.com)

Name : \_\_\_\_\_


## Answer key

### Single Digit Addition

Sheet 2


- 1) Juan has a collection of 9 vintage paintings. If he adds 8 antique paintings to it, how many paintings are in his collection?

**17 paintings**



- 2) Ethan bought 2 pounds of apples and 4 pounds of pears to make jam. How much do the fruits weigh altogether?

**6 pounds**



- 3) William had 8 papaya many papaya saplings.

**12 papaya saplings**

# PREVIEW

Gain complete access to the largest collection of worksheets in all subjects!

Members, please log in to download this worksheet.

Not a member? Please sign up to gain complete access.

[www.mathworksheets4kids.com](http://www.mathworksheets4kids.com)


- and 4 more saplings. How



- 4) Daisy and her friends many refreshments di

**14 refreshments**

- es and 7 soft drinks. How



- 5) Gabriel has 5 shirts in

**9 shirts**

- ts are in the wardrobe?



- 6) Oliver bought two crates in it. How many milk cartons did the crates hold in all.

**16 milk cartons**

- her crate had 7 milk cartons



- 7) Seven children were engaged in a game of tug of war. 3 more children joined them. How many children in all were engaged in the game?

**10 children**

