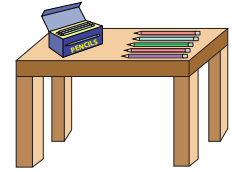


Name : \_\_\_\_\_

## Single Digit Addition

Sheet 3

- 1) After tea, it was time for Lara and friends to play bingo. She looked around for pencils and found 5 on her desk and 3 in her pencil case. How many pencils did she find in all?



\_\_\_\_\_

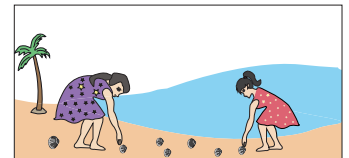
- 2) Ashley makes a hand bouquet. If she uses 9 red roses and 6 white roses, how many roses does she use in total?



\_\_\_\_\_

- 3) Susan collected 6 seashells and Tom collected 4 seashells altogether?

How many seashells did they collect



\_\_\_\_\_

- 4) Coach Andrew has 9 red balls and 4 blue balls


How many balls do they have in all?



\_\_\_\_\_

- 5) Jude has 2 smiley stickers and Tom has 3 sad face stickers

How many stickers do they have in all?



\_\_\_\_\_

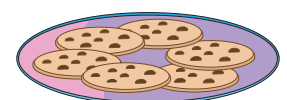
- 6) Sarah ordered two pizzas and Tom ordered one pizza. How many slices of pizza were there in all?

How many slices of pizza were there



\_\_\_\_\_

- 7) Ruby has 6 cookies in her plate. Lily gives her 3 more. How many cookies does Ruby have now?



\_\_\_\_\_

**PREVIEW**

Gain complete access to the largest collection of worksheets in all subjects!

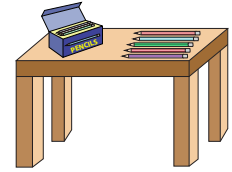
Members, please log in to download this worksheet.

Not a member? Please sign up to gain complete access.

[www.mathworksheets4kids.com](http://www.mathworksheets4kids.com)

**Single Digit Addition**

- 1) After tea, it was time for Lara and friends to play bingo. She looked around for pencils and found 5 on her desk and 3 in her pencil case. How many pencils did she find in all?



**8 pencils**

- 2) Ashley makes a hand bouquet. If she uses 9 red roses and 6 white roses, how many roses does she use in total?

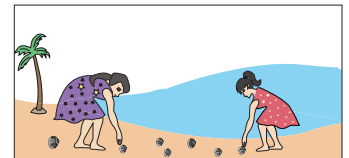


**15 roses**

- 3) Susan collected 6 seashells on the beach and her friend collected 11 seashells altogether?

**17 seashells**

How many seashells did they collect?



- 4) Coach Andrew has 9 basketballs and 4 soccer balls. How many balls does he have in all?

**13 balls**

**PREVIEW**  
Gain complete access to the largest collection of worksheets in all subjects!

Members, please log in to download this worksheet.

Not a member? Please sign up to gain complete access.


[www.mathworksheets4kids.com](http://www.mathworksheets4kids.com)



- 5) Jude has 2 smiley stickers and his friend has 4 more. How many stickers do they have in all?

**6 stickers**


How many stickers do they have in all?



- 6) Sarah ordered two pizzas. One pizza was cut into 5 slices and the other was cut into 5 slices. How many slices of pizza were there in all?

**10 slices of pizza**

How many slices of pizza were there?



- 7) Ruby has 6 cookies in her plate. Lily gives her 3 more. How many cookies does Ruby have now?

**9 cookies**

