


Name : \_\_\_\_\_

## Three-Digit Addition


Sheet 1

- 1) Viola, a candle maker produces 200 pillar candles and 250 rolled candles in seven days. How many candles in all does Viola make in a week?



\_\_\_\_\_

- 2) A botanical garden houses 360 Juniper bonsais and 150 Ficus bonsais. How many bonsais in all does the botanical garden shelter?



\_\_\_\_\_

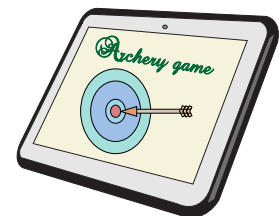
- 3) In an online archery game, a player scored 635 points. How many points did his sister, Janet pick up?

Gain complete access to the largest collection of worksheets in all subjects!

Members, please log in to download this worksheet.

Not a member? Please sign up to gain complete access.


\_\_\_\_\_



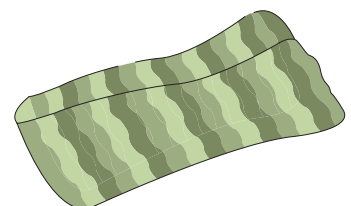
- 4) An animal farm sheltered 120 goats and 180 sheep. How many animals does the farm shelter in a week?

[www.mathworksheets4kids.com](http://www.mathworksheets4kids.com)

\_\_\_\_\_



- 5) Alice made and sold 505 crocheted pot holders and 325 crocheted headbands. How many items did she sell in all?



\_\_\_\_\_

Name : \_\_\_\_\_


## Answer key

### Three-Digit Addition

Sheet 1


- 1) Viola, a candle maker produces 200 pillar candles and 250 rolled candles in seven days. How many candles in all does Viola make in a week?

**450 candles**



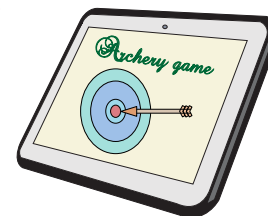
- 2) A botanical garden houses 360 Juniper bonsais and 150 Ficus bonsais. How many bonsais in all does the botanical garden shelter?

**510 bonsais**




- 3) In an online archery game, Janet scored 635 points. How many points did her sister, Janet, pick up in all?

**1,435 points**




- 4) An animal farm sheltered 150 goats and 621 sheep. How many grazing animals does the farm shelter in all?

**771 grazing animals**



- 5) Alice made and sold 505 crocheted pot holders and 325 crocheted headbands. How many items did she sell in all?

**830 items**



**PREVIEW**

Gain complete access to the largest collection of worksheets in all subjects!

Members, please log in to download this worksheet.

Not a member? Please sign up to gain complete access.

[www.mathworksheets4kids.com](http://www.mathworksheets4kids.com)