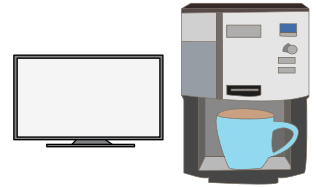


Name : _____

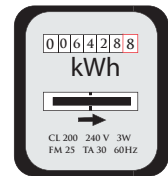
Three-Digit Addition

Sheet 3

- 1) Juanita made a savings of \$270 on the purchase of an LED TV during a clearance sale. She also made a savings of \$100 on the purchase of a coffee maker. How much money did Juanita save altogether?



- 2) Jacob owns a two-story house. In April, the consumption of electricity was 500 units. The electricity meter recorded 650 units for the month of May. How much electricity was consumed in April?




- 3) Franklin made a savings of \$150 on the purchase of a new book. What is his total savings?

Gain complete access to the largest collection of worksheets in all subjects!

Members, please log in to download this worksheet.

Not a member? Please sign up to gain complete access.

and credit card dues.



- 4) Craig is an avid collector of coins of different denominations. How many coins has he accumulated?

196 American coins in all has Craig



- 5) A Willy Wonka vending machine is stocked with 100 Gobstopper candies and 115 Nerds candies. How many goodies does the vending machine contain altogether?



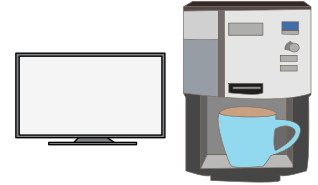
Name : _____

Answer key

Three-Digit Addition

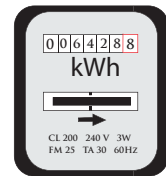
Sheet 3

- 1) Juanita made a savings of \$270 on the purchase of an LED TV during a clearance sale. She also made a savings of \$100 on the purchase of a coffee maker. How much money did Juanita save altogether?



\$370

- 2) Jacob owns a two-story house. In April, the consumption of electricity was 500 units. The electricity meter recorded 650 units for the month of May. How much electricity was consumed in April?




1,150 units

- 3) Franklin made a purchase of \$100. He also paid for his credit card dues. What is his total amount paid?

\$50

and credit card dues.



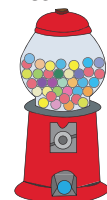
- 4) Craig is an avid collector of coins. He has 100 American coins of different denominations. How many more coins has he accumulated?

coins and 196 American coins in all has Craig



428 coins

- 5) A Willy Wonka vending machine is stocked with 100 Gobstopper candies and 115 Nerds candies. How many goodies does the vending machine contain altogether?



215 goodies

PREVIEW

Gain complete access to the largest collection of worksheets in all subjects!

Members, please log in to download this worksheet.

Not a member? Please sign up to gain complete access.

www.mathworksheets4kids.com