

Three-Digit & Two-Digit Addition

- 1) Mrs. Jenkin's vegetable patch at her home yielded 89 carrots in September and 376 in the next 3 months. What was the total yield of carrots from the vegetable patch?



- 2) A children's choir has 236 girls and 11 boys. What is the total strength of the children's choir?



- 3) Alex collects Box
126 coupons in .
Alex collect duri

Gain complete access to the largest
collection of worksheets in all subjects!

Members, please
log in to
download this
worksheet.

Not a member?
Please sign up to
gain complete
access.


www.mathworksheets4kids.com

r break. He gathers
coupons in total did

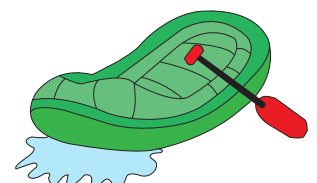


- 4) Olivia has \$970 i
bank. What does

ed up in her piggy



- 5) A water park sold 99 tickets for water rides and 293 tickets for water rafting on Sunday. How many tickets did the water park sell in all?



Three-Digit & Two-Digit Addition

- 1) Mrs. Jenkin's vegetable patch at her home yielded 89 carrots in September and 376 in the next 3 months. What was the total yield of carrots from the vegetable patch?

465 carrots



- 2) A children's choir has 236 girls and 11 boys. What is the total strength of the children's choir?

247 children



- 3) Alex collects Box Tops for Education. He has collected 126 coupons in September and 63 coupons in October. How many coupons did Alex collect during the two months?

179 Box Tops

Gain complete access to the largest collection of worksheets in all subjects!

Members, please log in to download this worksheet.

Not a member? Please sign up to gain complete access.

www.mathworksheets4kids.com


For break. He gathers coupons in total did



- 4) Olivia has \$970 in her piggy bank. She spent \$124 on a new dress. How much money does she have left in her piggy bank?

\$1,056

ed up in her piggy



- 5) A water park sold 99 tickets for water rides and 293 tickets for water rafting on Sunday. How many tickets did the water park sell in all?

392 tickets

