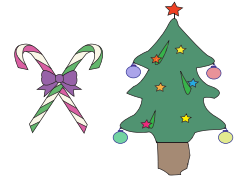



Two-Digit Addition - Regrouping

- 1) Ashley decorated her Christmas tree with 15 candy canes and 46 colored paper stars. How many ornamental items in all did she use to decorate the Christmas tree?



- 2) Lara's dog, Pluto buried 14 bones in the garden in the month of March. He buried 18 more bones than he buried in March in the month of April. How many bones did Pluto bury in the month of April?



- 3) The ground storey of a house received 12 gallons of rain water during the first week of October. The second week of October it received 18 gallons more than the first week. How many gallons of rain water did the house receive through the fortnight?


Gain complete access to the largest collection of worksheets in all subjects!

Members, please log in to download this worksheet.

Not a member? Please sign up to gain complete access.



- 4) A balloon arch was made up of 15 white balloons and 25 green balloons. How many balloons in all were used to make the arch?



- 5) Samantha has saved up \$95. She also received \$65 in pocket money from her father. How much money does she have altogether?



Two-Digit Addition - Regrouping


- 1) Ashley decorated her Christmas tree with 15 candy canes and 46 colored paper stars. How many ornamental items in all did she use to decorate the Christmas tree?

61 ornamental items



- 2) Lara's dog, Pluto buried 14 bones in the garden in the month of March. He buried 18 more bones than the first month in April. How many bones did Pluto bury in the month of April?

32 bones



- 3) The ground storey of a house received 35 gallons of rain water during the first week of October. The second week of October it received 20 gallons more than the first week. How many gallons of rain water did the house receive through the fortnight?

55 gallons


of rain water during the first week of October. The second week of October it received 20 gallons more than the first week. How many gallons of rain water did the house receive through the fortnight?



- 4) A balloon arch was made up of 50 balloons. The arch was made up of 80 balloons more than the first arch. How many balloons were used to make the second arch?

130 balloons

of her house. The second week of October it received 20 gallons more than the first week. How many gallons of rain water did the house receive through the fortnight?



- 5) Samantha has saved up \$95. She also received \$65 in pocket money from her father. How much money does she have altogether?

\$160



PREVIEW

Gain complete access to the largest collection of worksheets in all subjects!

Members, please log in to download this worksheet.

Not a member? Please sign up to gain complete access.

www.mathworksheets4kids.com