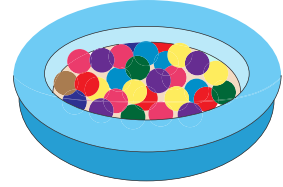


Name : _____


Two-Digit & Single-Digit Addition

Sheet 1


- 1) A ball pit has 89 colored balls in it. Ashley throws 5 more balls into the pit. How many balls are in the pit now?



- 2) A baby beaver weighed 6 pounds in October. The weight increased by 24 pounds in three months. What would the new weight be?



- 3) John ordered a pizza and a choco-chip cookie. The pizza cost \$14 and the cookie was priced at \$7. How much money did John spend in all?



- 4) Rebecca and Sandra played Angry Birds online. At half an hour into the game, Rebecca had passed level 26. If Sandra was ahead of Rebecca by 3 levels, what level was Sandra in?



- 5) Rick decides to light up his drive way using 24 porch lights. He also adds 8 more lights to the patio. How many lights did Rick use in all?

