


Name : \_\_\_\_\_

## Two-Digit & Single-Digit Addition


Sheet 2

- 1) Thirteen students of grade 3 are present in the class, while 4 are away attending a basketball event. What is the total strength of the class?



\_\_\_\_\_

- 2) Bailey had 30 dimes in his piggy bank. His grandfather gave him 3 more. How many dimes in total does Bailey's piggy bank contain now?



\_\_\_\_\_

- 3) Twenty children  
How many children

Gain complete access to the largest  
collection of worksheets in all subjects!

Members, please  
log in to  
download this  
worksheet.

Not a member?  
Please sign up to  
gain complete  
access.

[www.mathworksheets4kids.com](http://www.mathworksheets4kids.com)

bikes in a skate park.



\_\_\_\_\_

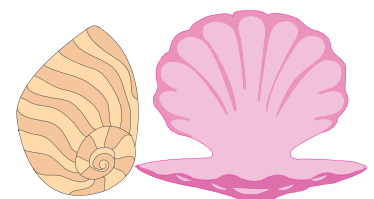
- 4) An ice cream parlor  
8 more ice cream  
on Sunday?

day, the parlor sold  
cups did the parlor sell



\_\_\_\_\_

- 5) Despite giving 6 seashells to Noam, Anna was still left with 50 seashells. How many seashells did Anna initially have?




\_\_\_\_\_

**Two-Digit & Single-Digit Addition**


- 1) Thirteen students of grade 3 are present in the class, while 4 are away attending a basketball event. What is the total strength of the class?

**17 students**



- 2) Bailey had 30 dimes in his piggy bank. His grandfather gave him 3 more. How many dimes in total does Bailey's piggy bank contain now?

**33 dimes**



- 3) Twenty children were riding bicycles in a skate park. How many children were riding bicycles in a skate park?

**25 children**

**PREVIEW**  
Gain complete access to the largest collection of worksheets in all subjects!

Members, please log in to download this worksheet.

Not a member? Please sign up to gain complete access.

[www.mathworksheets4kids.com](http://www.mathworksheets4kids.com)

bicycles in a skate park.



- 4) An ice cream parlor sold 72 ice creams on Saturday and 7 more ice creams on Sunday?

**79 ice creams**

day, the parlor sold how many ice creams did the parlor sell



- 5) Despite giving 6 seashells to Noam, Anna was still left with 50 seashells. How many seashells did Anna initially have?

**56 seashells**

