


Name : \_\_\_\_\_

## Addition - Up to 20


Sheet 1

- 1) On a weekday, the women and children coach in a tube train had 15 women and 5 children. How many passengers were onboard the coach?



\_\_\_\_\_

- 2) Mary collects 10 pine cones. Her brother Mike gives her 4 more. How many pine cones does Mary have altogether?

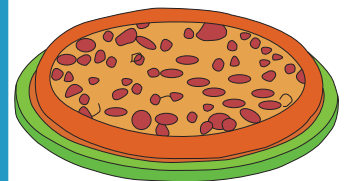


\_\_\_\_\_

- 3) Cynthia ordered a small pizza with 7 slices. How many slices did she eat?

Gain complete access to the largest collection of worksheets in all subjects!

a small pizza with



\_\_\_\_\_

- 4) Joshua bought a tin of coconut cookies. How much did it cost?

Members, please log in to download this worksheet.

Not a member? Please sign up to gain complete access.

tin of coconut cookies.



\_\_\_\_\_


- 5) Thirteen students from grade 1 enroll for a new kung fu course. After a few days, two more join. How many students in total are part of this course?



\_\_\_\_\_

**Addition - Up to 20**


- 1) On a weekday, the women and children coach in a tube train had 15 women and 5 children. How many passengers were onboard the coach?



**20 passengers**

---

- 2) Mary collects 10 pine cones. Her brother Mike gives her 4 more. How many pine cones does Mary have altogether?



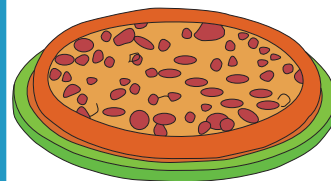
**14 pine cones**

---

- 3) Cynthia ordered a pizza with 12 slices. She ate 5 slices. How many slices are left?

**Gain complete access to the largest collection of worksheets in all subjects!**

a small pizza with



**19 slices of pizza**

---

- 4) Joshua bought a tin of coconut cookies for \$3.00. He ate 3 cookies. How much did the tin cost?

tin of coconut cookies.



**9 ounces**

---

- 5) Thirteen students from grade 1 enroll for a new kung fu course. After a few days, two more join. How many students in total are part of this course?



**15 students**

---