


Name : \_\_\_\_\_

## Addition - Up to 20


Sheet 2

- 1) Anna has a collection of 19 fashion dolls. She soon gets one more as a birthday gift. How many fashion dolls does Anna have in her collection now?



\_\_\_\_\_

- 2) There are 16 children going on the roller coaster. With two more children on board after a while, how many children are there altogether?



\_\_\_\_\_

- 3) At a clearance sale, a girl bought a dress for \$12. How much did she spend altogether?

Gain complete access to the largest collection of worksheets in all subjects!


- 4) A girl bought a dress for \$12 and a pair of shoes for \$6. How much did she spend altogether?



\_\_\_\_\_

- 4) Jude and Nancy caught 15 butterflies. How many butterflies did they catch in total?

- 5) A girl caught 15 butterflies. How many butterflies did she catch in total?



\_\_\_\_\_

- 5) Martin borrowed a novel from the library. He read 8 chapters on Saturday and 9 chapters on Sunday. How many chapters in all did he read over the weekend?



\_\_\_\_\_