

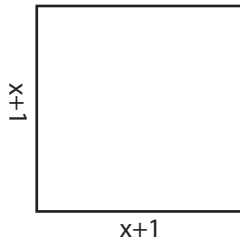
Name : _____

Area & Perimeter

Sheet 1

Find the area and perimeter of each rectangle.

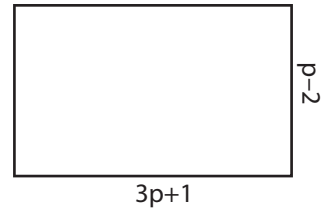
1)



Area = _____

Perimeter = _____

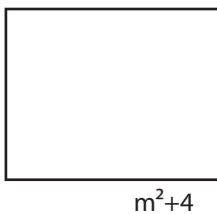
2)



Area = _____

Perimeter = _____

3)



Area = _____

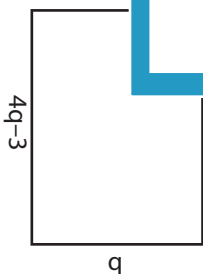
Perimeter = _____



Area = _____

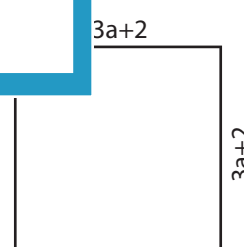
Perimeter = _____

5)



Area = _____

Perimeter = _____



Area = _____

Perimeter = _____

PREVIEW

Gain complete access to the largest collection of worksheets in all subjects!

Members, please log in to download this worksheet.

Not a member? Please sign up to gain complete access.

www.mathworksheets4kids.com

Name : _____

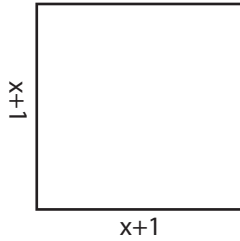
Answer key

Area & Perimeter

Sheet 1

Find the area and perimeter of each rectangle.

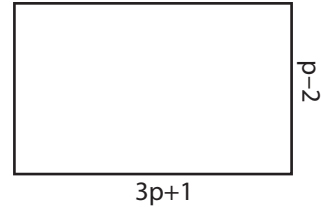
1)



Area = _____

Perimeter = _____

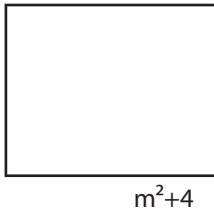
2)



Area = $3p^2-5p-2$

Perimeter = $8p-2$

3)



Area = _____

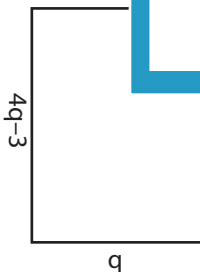
Perimeter = _____



Area = $10u^2-2u$

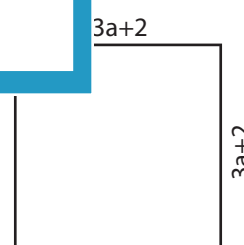
Perimeter = $14u-2$

5)



Area = $4q^2-3q$

Perimeter = $10q-6$



Area = $9a^2+12a+4$

Perimeter = $12a+8$

PREVIEW

Gain complete access to the largest collection of worksheets in all subjects!

Members, please log in to download this worksheet.

Not a member? Please sign up to gain complete access.

www.mathworksheets4kids.com