

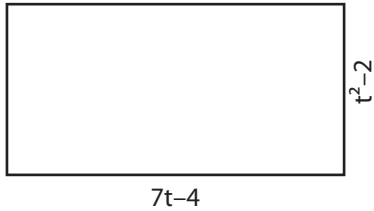
Name : \_\_\_\_\_

## Area & Perimeter

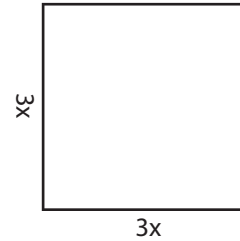
Sheet 5

Find the area and perimeter of each rectangle.

1)



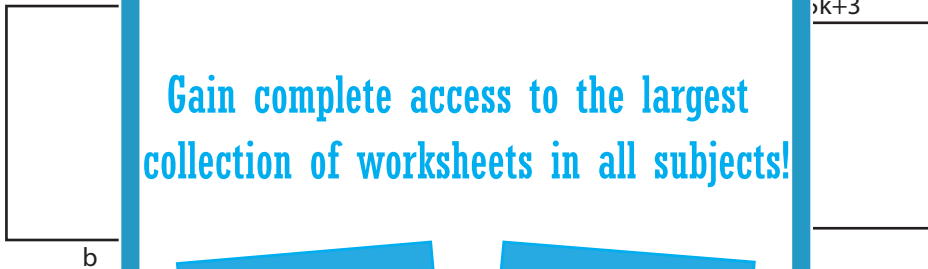
2)



Area = \_\_\_\_\_

Perimeter = \_\_\_\_\_

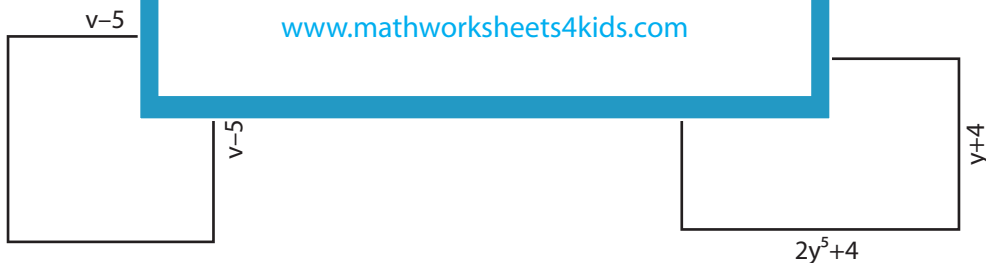
3)



Area = \_\_\_\_\_

Perimeter = \_\_\_\_\_

5)



Area = \_\_\_\_\_

Area = \_\_\_\_\_

Perimeter = \_\_\_\_\_

Perimeter = \_\_\_\_\_

**PREVIEW**

Gain complete access to the largest collection of worksheets in all subjects!

Members, please log in to download this worksheet.

Not a member? Please sign up to gain complete access.

[www.mathworksheets4kids.com](http://www.mathworksheets4kids.com)

