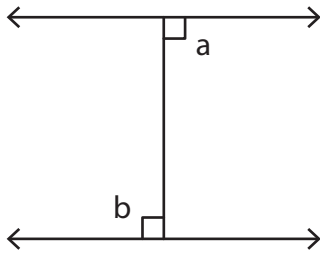


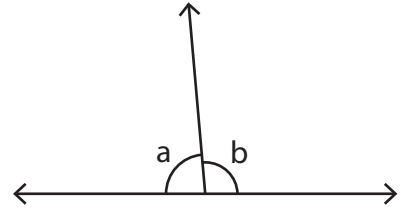
Adjacent Angles

State whether the indicated angle pairs are adjacent or not.

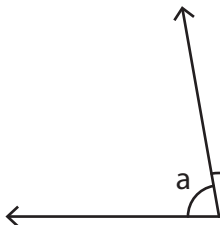
1)



2)



3)



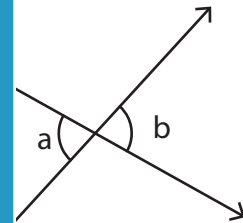
PREVIEW

Gain complete access to the largest collection of worksheets in all subjects!

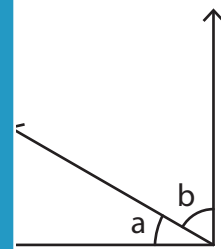
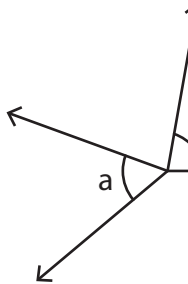
Members, please log in to download this worksheet.

Not a member? Please sign up to gain complete access.

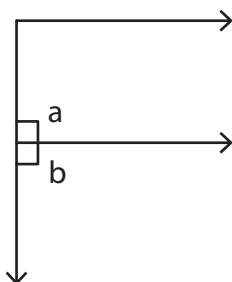
www.mathworksheets4kids.com



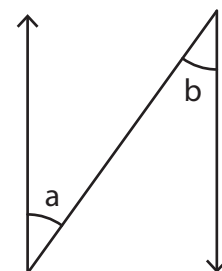
5)



7)



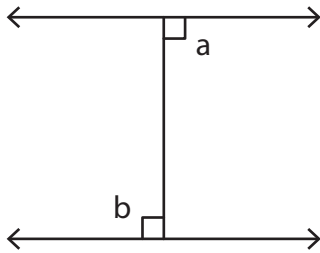
8)



Adjacent Angles

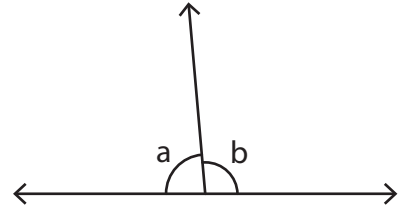
State whether the indicated angle pairs are adjacent or not.

1)



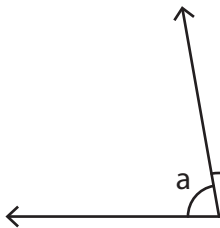
not adjacent

2)

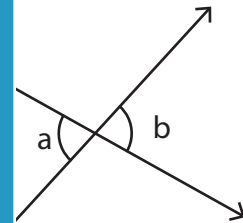


adjacent

3)

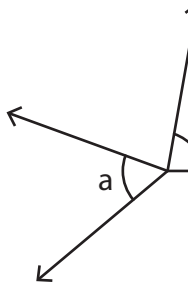


adjacent

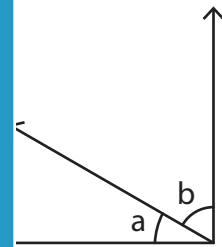


not adjacent

5)



not adj.



adjacent

PREVIEW

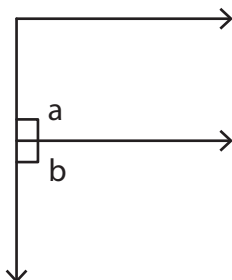
Gain complete access to the largest collection of worksheets in all subjects!

Members, please log in to download this worksheet.

Not a member? Please sign up to gain complete access.

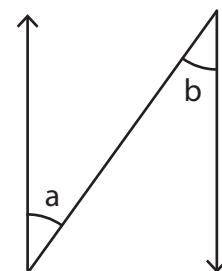
www.mathworksheets4kids.com

7)



adjacent

8)



not adjacent